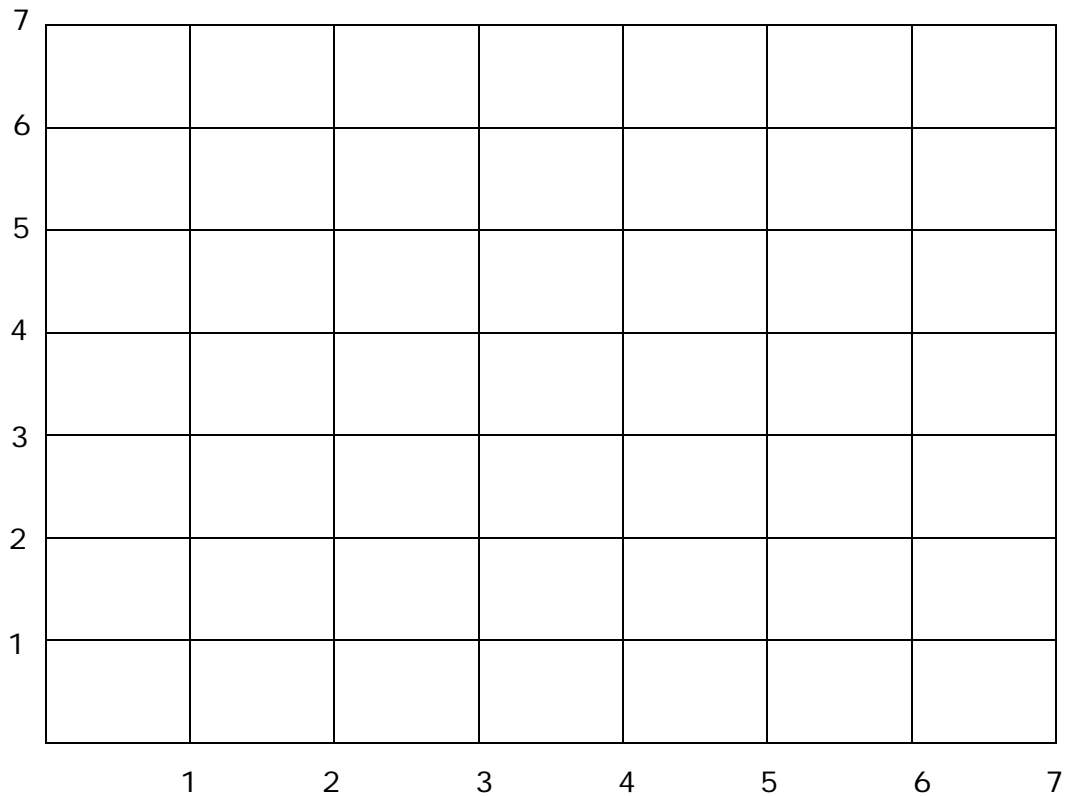


Name \_\_\_\_\_

Date \_\_\_\_\_

Topic: Draw the Position- Worksheet 1



Draw the following shapes on the grid.

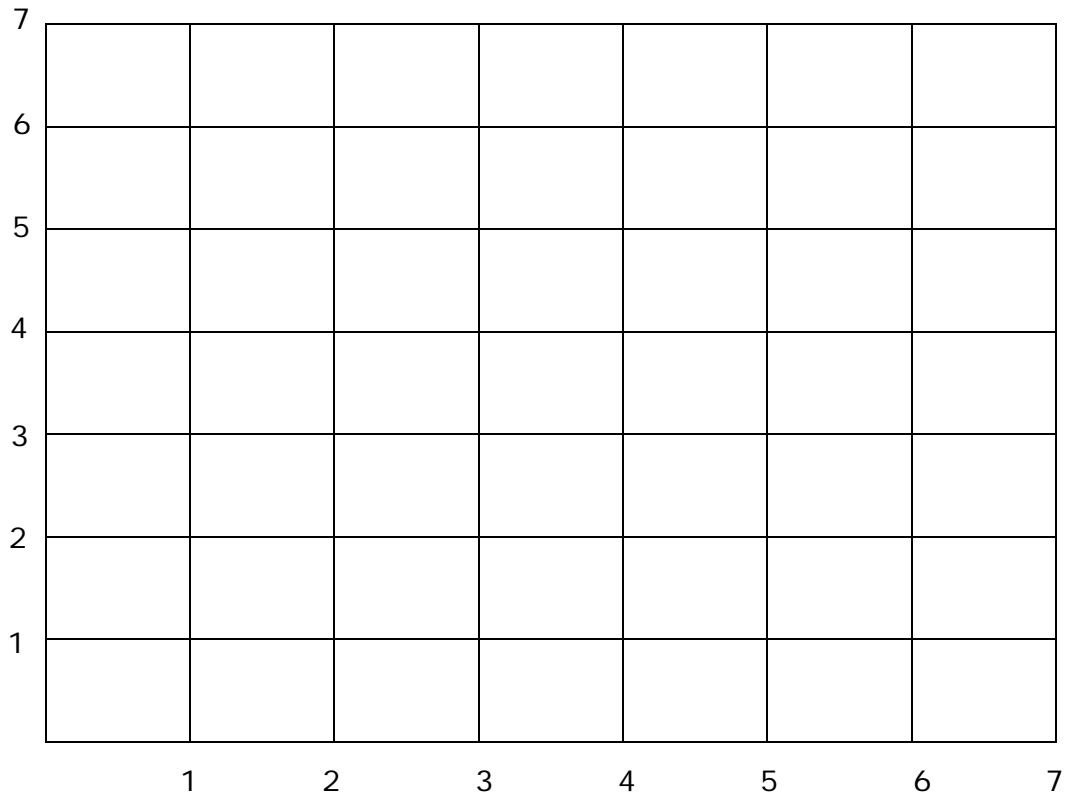
- 1 Draw a square at (3, 6).
- 2 Draw a rectangle at (2, 2).
- 3 Draw a pentagon at (4, 4).
- 4 Draw a pyramid at (6, 1).
- 5 Draw a sphere at (1, 3).
- 6 Draw a triangle at (1, 6).
- 7 Draw a circle at (3, 3).
- 8 Draw a cylinder at (7, 4).
- 9 Draw a hexagon at (6, 6).
- 10 Draw an oval at (5, 1).



Name \_\_\_\_\_

Date \_\_\_\_\_

Topic: Draw the Position- Worksheet 2



Draw the following shapes on the grid.

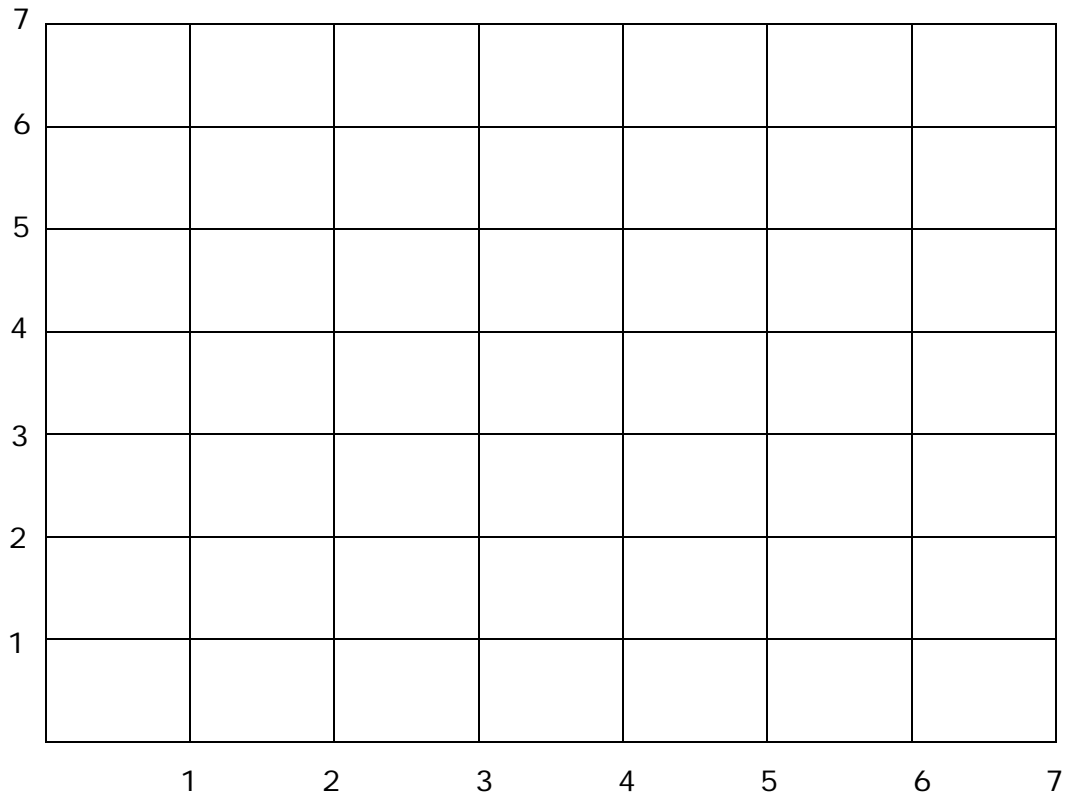
- 1 Draw a square at (2, 5).
- 2 Draw a rectangle at (3, 3).
- 3 Draw a pentagon at (6, 5).
- 4 Draw a pyramid at (1, 2).
- 5 Draw a sphere at (7, 4).
- 6 Draw a triangle at (4, 1).
- 7 Draw a circle at (5, 7).
- 8 Draw a cylinder at (2, 2).
- 9 Draw a hexagon at (3, 2).
- 10 Draw an oval at (5, 1).



Name \_\_\_\_\_

Date \_\_\_\_\_

Topic: Draw the Position- Worksheet 3



Draw the following shapes on the grid.

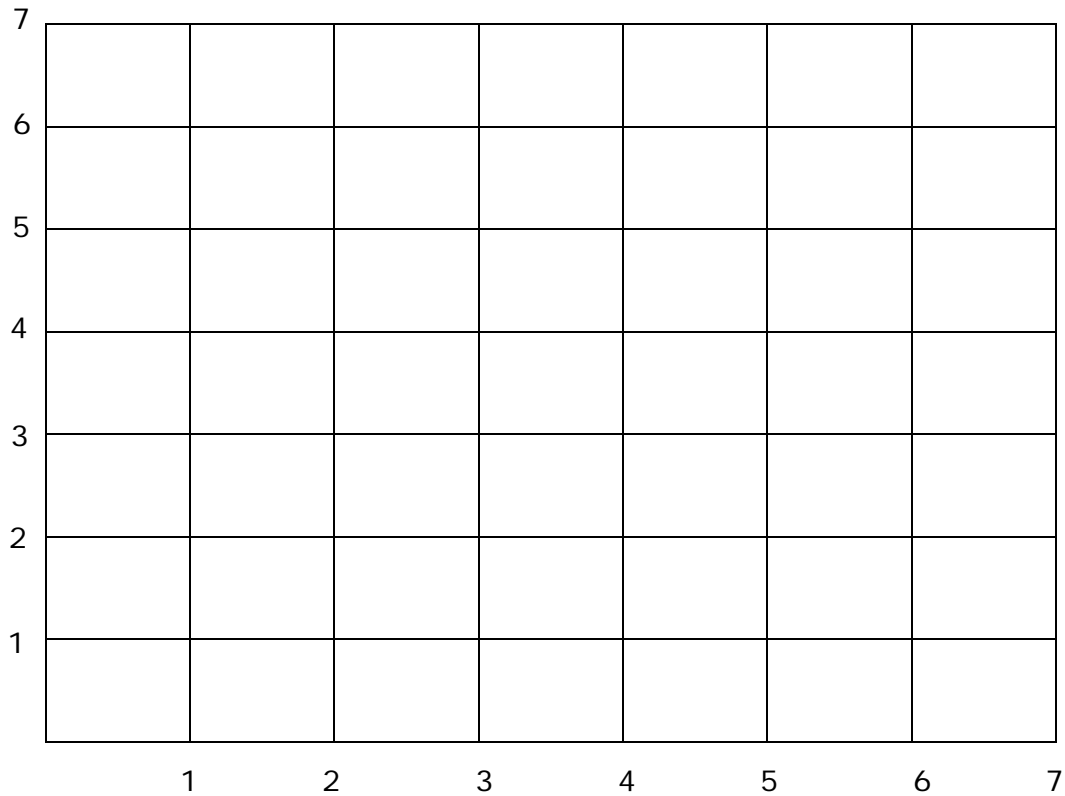
- 1 Draw a square at (1, 7).
- 2 Draw a rectangle at (2, 6).
- 3 Draw a pentagon at (3, 5).
- 4 Draw a pyramid at (4, 4).
- 5 Draw a sphere at (5, 3).
- 6 Draw a triangle at (6, 2).
- 7 Draw a circle at (7, 1).
- 8 Draw a cylinder at (5, 5).
- 9 Draw a hexagon at (3, 3).
- 10 Draw an oval at (1, 5).



Name \_\_\_\_\_

Date \_\_\_\_\_

Topic: Draw the Position- Worksheet 4



Draw the following shapes on the grid.

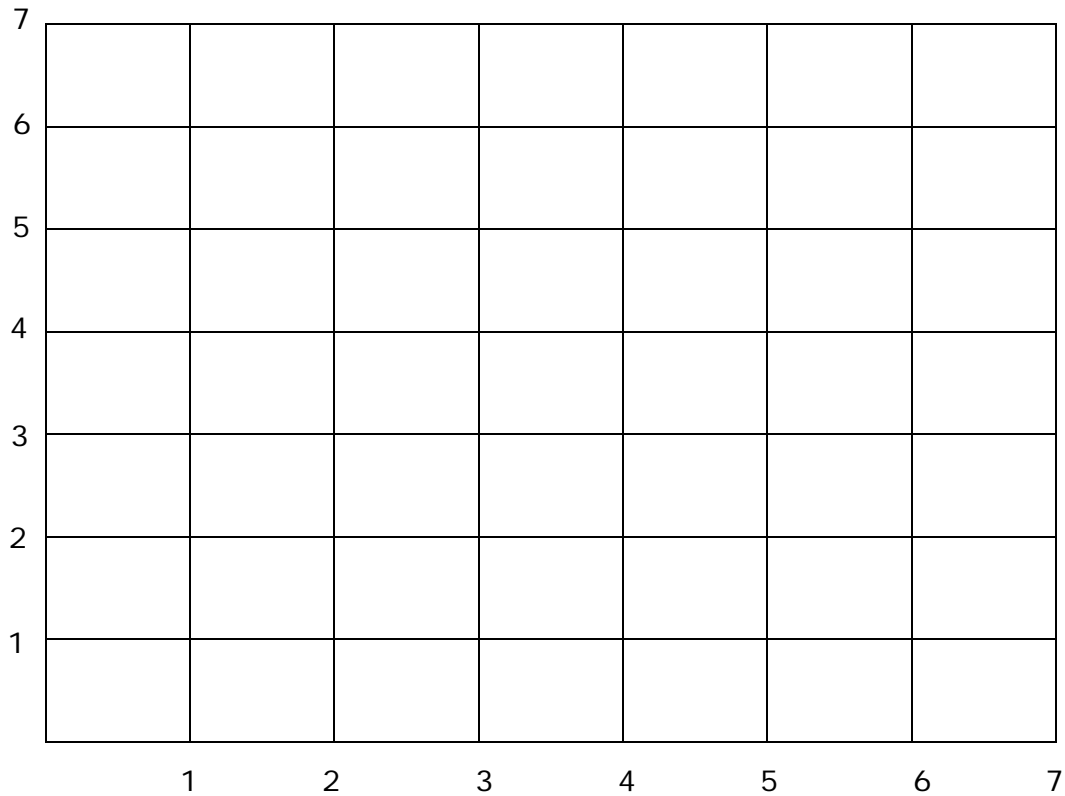
- 1 Draw a square at (7, 7).
- 2 Draw a rectangle at (3, 6).
- 3 Draw a pentagon at (2, 4).
- 4 Draw a pyramid at (1, 2).
- 5 Draw a sphere at (4, 5).
- 6 Draw a triangle at (5, 1).
- 7 Draw a circle at (6, 3).
- 8 Draw a cylinder at (3, 2).
- 9 Draw a hexagon at (4, 6).
- 10 Draw an oval at (1, 4).



Name \_\_\_\_\_

Date \_\_\_\_\_

Topic: Draw the Position- Worksheet 5



Draw the following shapes on the grid.

- 1 Draw a square at (2, 3).
- 2 Draw a rectangle at (5, 6).
- 3 Draw a pentagon at (7, 4).
- 4 Draw a pyramid at (3, 2).
- 5 Draw a sphere at (1, 5).
- 6 Draw a triangle at (4, 1).
- 7 Draw a circle at (6, 7).
- 8 Draw a cylinder at (5, 2).
- 9 Draw a hexagon at (3, 6).
- 10 Draw an oval at (1, 3).

