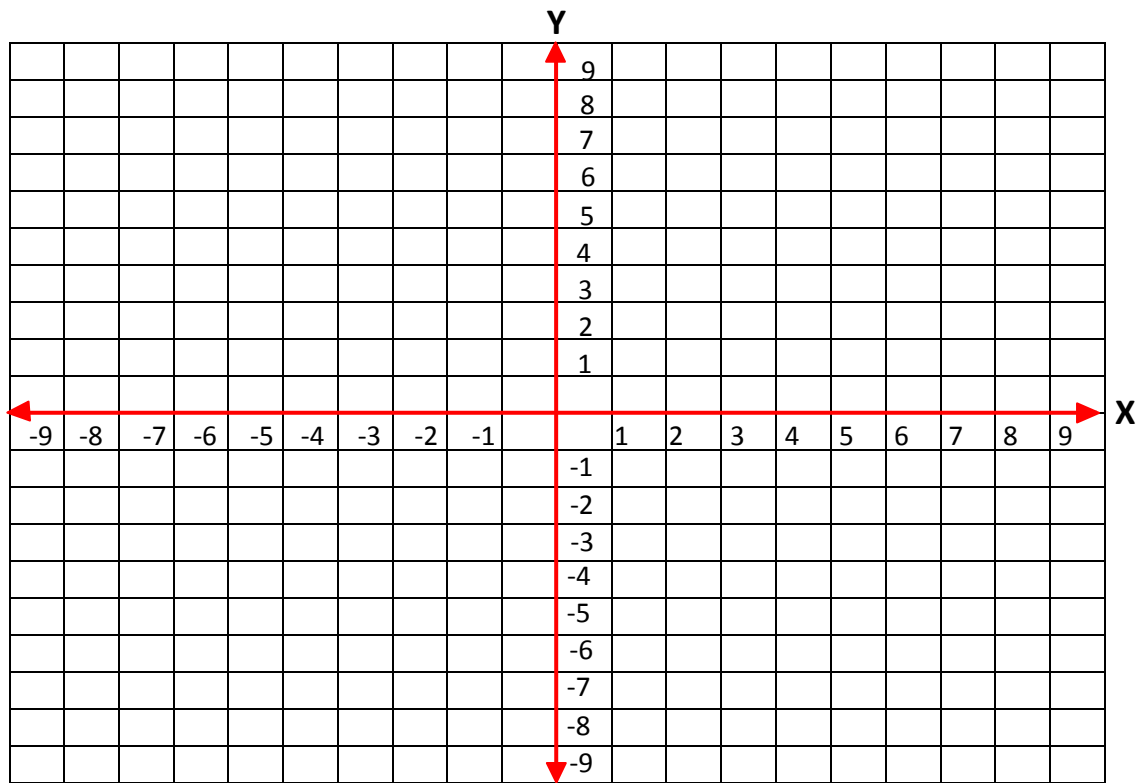


Name _____

Date _____

Topic: Locate Ordered Pairs - Worksheet 1



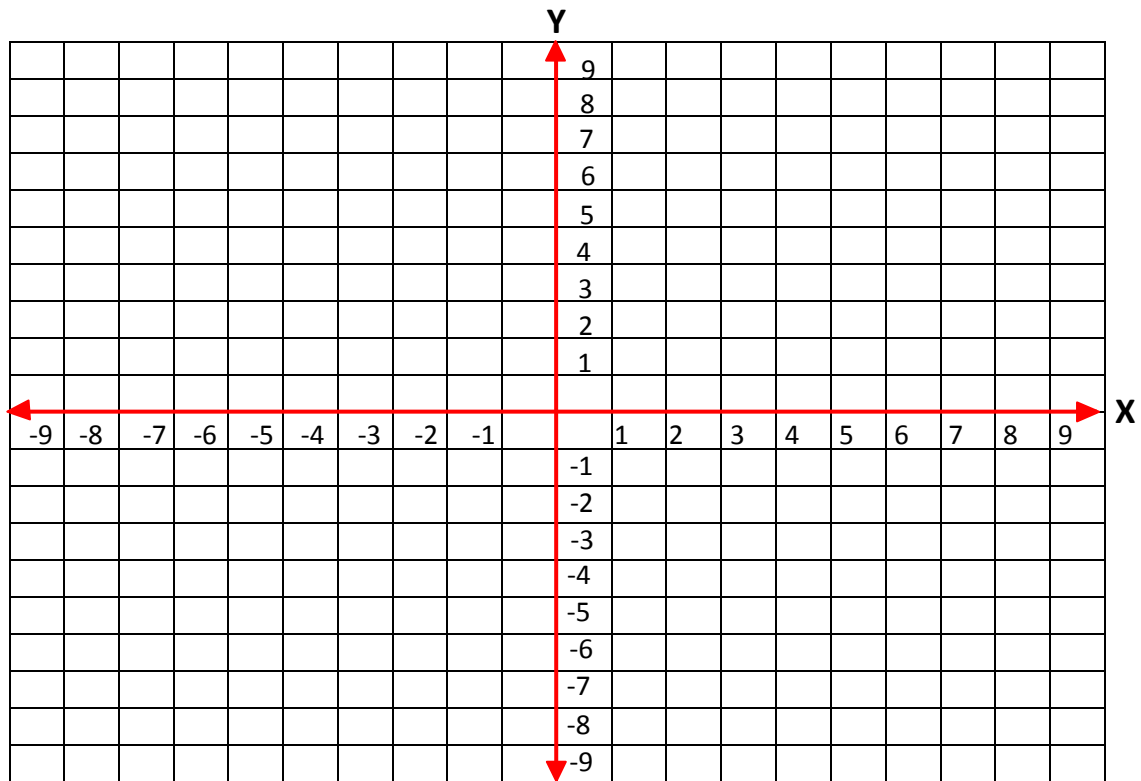
- | | | | |
|----|--------|----|---------|
| a. | (-6,3) | b. | (6, -6) |
| c. | (5, 6) | d. | (5, 1) |
| e. | (4,6) | f. | (8,4) |
| g. | (-7,3) | h. | (4,-4) |
| i. | (6,-3) | j. | (-6,3) |



Name _____

Date _____

Topic: Locate Ordered Pairs - Worksheet 2



b. (-2,4)

b. (-1, -3)

c. (5,-5)

d. (5, 2)

e. (4,-4)

f. (8,5)

g. (-7,2)

h. (8,-4)

i. (3,-3)

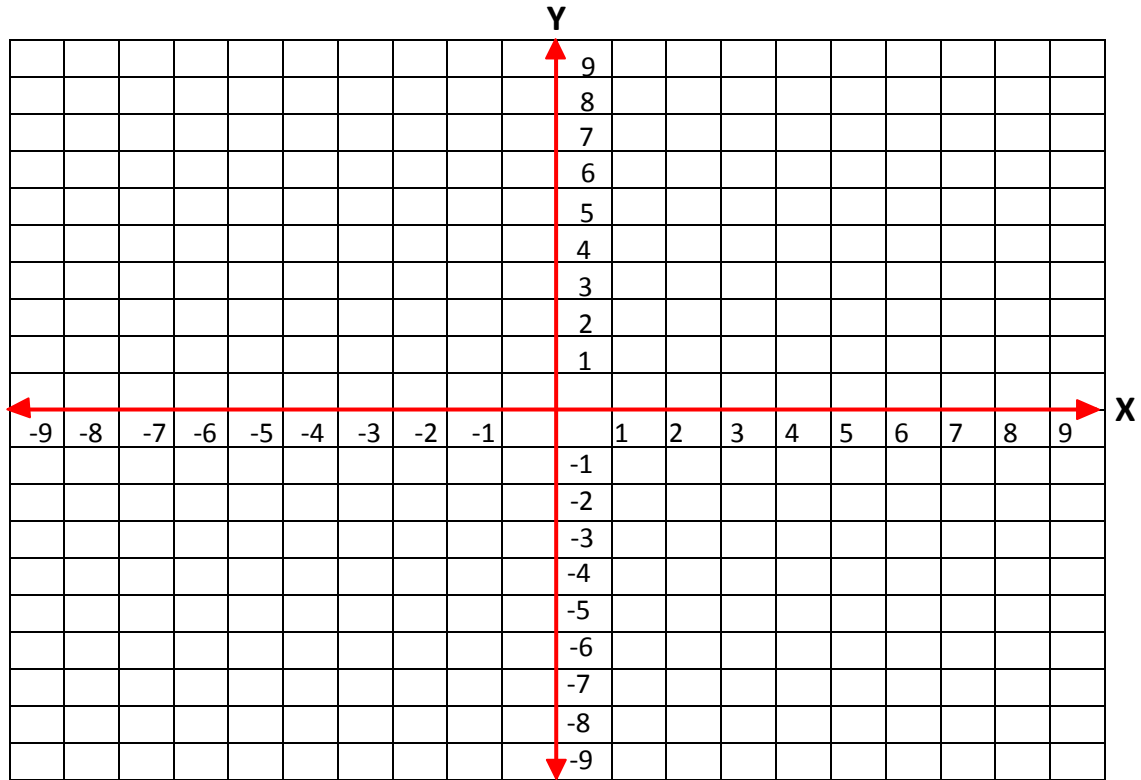
j. (-6,2)



Name _____

Date _____

Topic: Locate Ordered Pairs - Worksheet 3



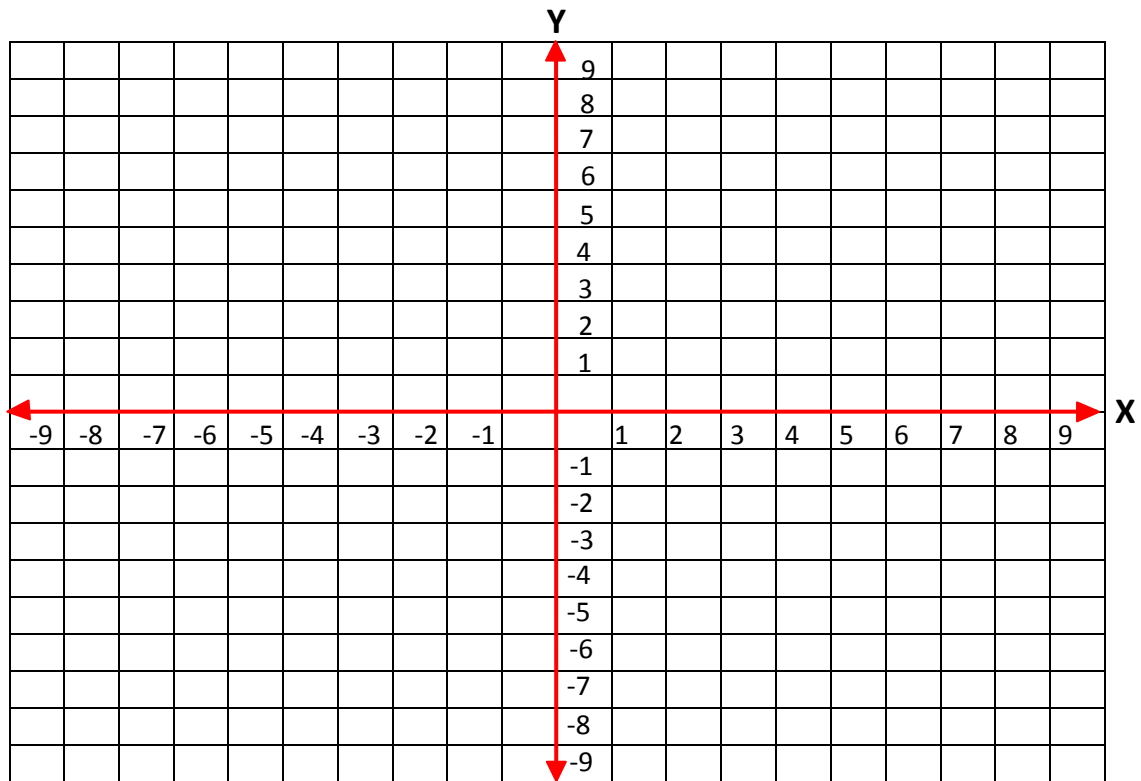
- | | | | |
|----|--------|----|--------|
| a. | (-3,5) | b. | (-1,2) |
| c. | (5,5) | d. | (5,-2) |
| e. | (-4,4) | f. | (8,-5) |
| g. | (-1,2) | h. | (6,-4) |
| i. | (3,-7) | j. | (-6,4) |



Name _____

Date _____

Topic: Locate Ordered Pairs - Worksheet 4



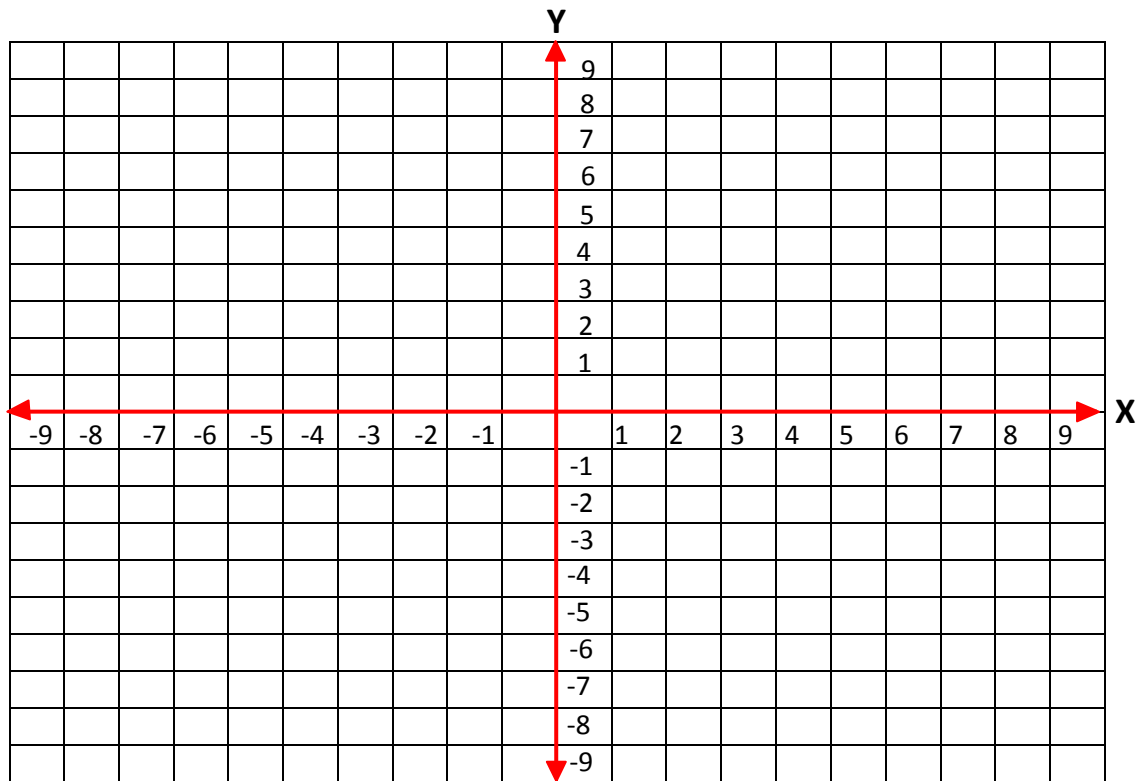
- | | | | |
|----|--------|----|---------|
| a. | (-6,4) | b. | (-3,3) |
| c. | (5,-5) | d. | (1,-2) |
| e. | (-4,2) | f. | (5,-4) |
| g. | (4,3) | h. | (2,-4) |
| i. | (3,-2) | j. | (-3,-4) |



Name _____

Date _____

Topic: Locate Ordered Pairs - Worksheet 5



- | | | | |
|----|--------|----|---------|
| a. | (-2,4) | b. | (-1,4) |
| c. | (5,-6) | d. | (1,-3) |
| e. | (-5,3) | f. | (2,-3) |
| g. | (4,4) | h. | (-2,-7) |
| i. | (3,-4) | j. | (-3,3) |

