

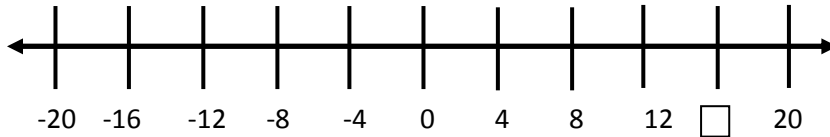
Name \_\_\_\_\_

Date \_\_\_\_\_

## Understand A Rational Number As A Point - Matching Worksheet

Match the word problems to the correct answers. Write the letter of the answer that matches the problem.

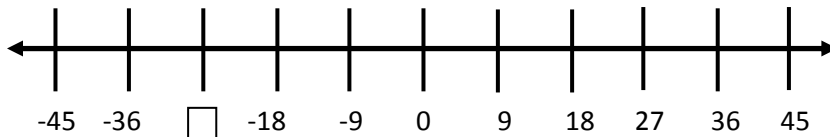
- \_\_\_\_\_ 1. Complete the number line below. Find the missing number. a. -45



- \_\_\_\_\_ 2. What's the end value of  $-(+19)$ ? b. 57

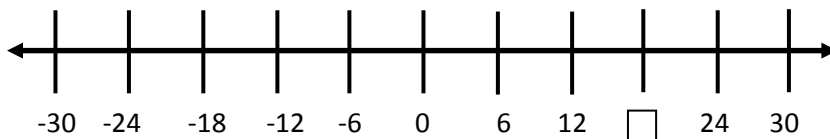
- \_\_\_\_\_ 3. What is the opposite of 45? c. -13

- \_\_\_\_\_ 4. Complete the number line below. Find the missing number. d. 16



- \_\_\_\_\_ 5. What is the opposite of -57? e. -19

- \_\_\_\_\_ 6. Complete the number line below. Find the missing number. f. 18



- \_\_\_\_\_ 7. Write the end value of  $+(-13)$ ? g. 27

