

Name \_\_\_\_\_

Date \_\_\_\_\_

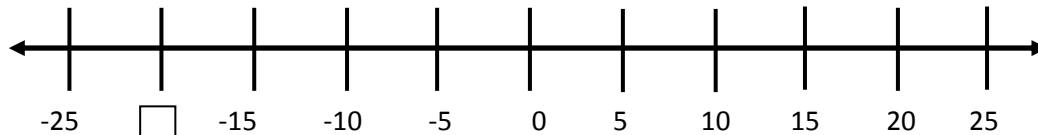
### Understand A Rational Number As A Point - Independent Practice

Complete all the problems.

1. What is the opposite of -12?

2. What is the value of  $-(-5)$ ?

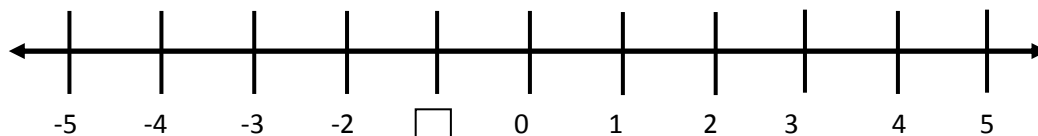
3. Complete the number line below. Find the missing number.



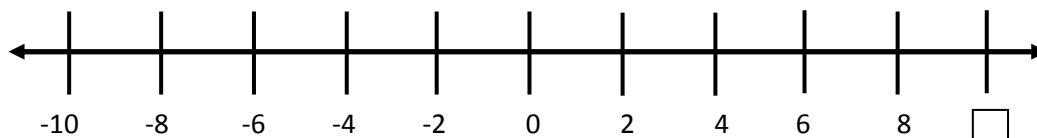
4. What is the opposite of 74?

5. What is the end value of  $+(-16)$ ?

6. Complete the number line below. Find the missing number.



7. Complete the number line below. Find the missing number.



8. What is the opposite of -36?

9. What is the end value of  $-(+11)$ ?

10. Complete the number line below. Find the missing number.

