

Name _____

Date _____

Generating Math Patterns From Rules - Independent Practice Worksheet

I. Complete the tables according to the functions.

1. Function $a = 12b + 5$

a	b
	2
	3
	4
	5

2. Function $f = 10b + 2$

f	b
	2
	3
	4

3. Function $p = 8s + 4$

p	s
	4
	5
	6



Name _____

Date _____

4. Function $q = 14t + 3$

q	t
	3
	5
	6

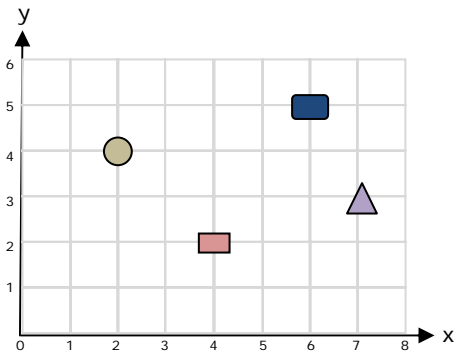
5. Function $u = 16v + 8$

u	v
	6
	7
	8

II. Plotting Ordered Pairs.

Draw a shape in the blank.

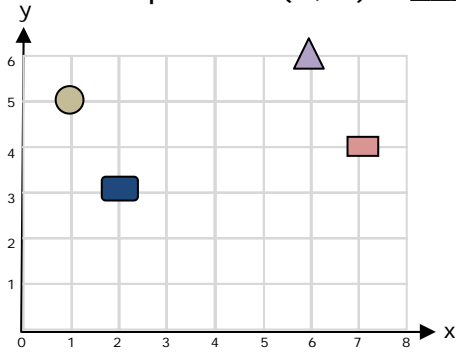
1. Which shape is at $(2, 4)$? _____



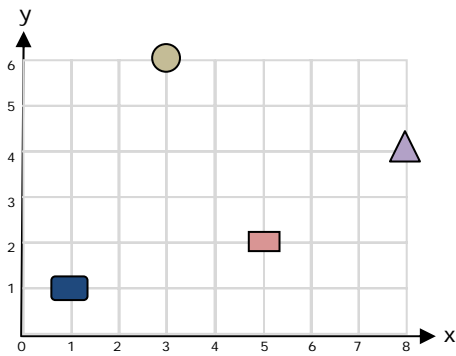
Name _____

Date _____

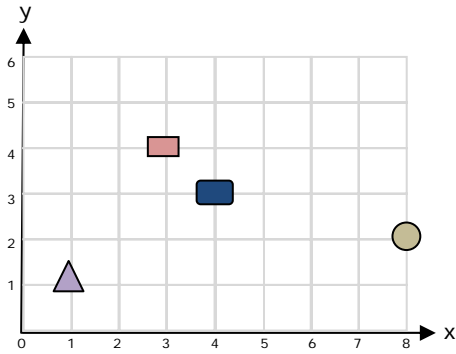
2. Which shape is at (6, 6)? _____



3. Which shape is at (5, 2)? _____



4. Which shape is at (4, 3)? _____



5. Which shape is at (8, 2)? _____

