

Name _____

Date _____

Classify Two-Dimensional Figures - Matching Worksheet

Match the following questions to their answers. Write the letter of the answer that matches the questions.

_____ 1. Fill in the blank

a. Oval

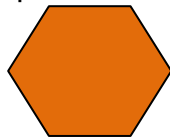
_____ has 4 sides all equal, no sides are perpendicular.

_____ 2. A shape is a quadrilateral in which both pairs of opposite sides are parallel and congruent. All sides are the same length. What is this shape?

b. Triangle

_____ 3. Identify the shape?

c. Parallelogram



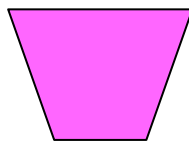
_____ 4. Fill in the blank

d. Hexagon

_____ has 4 sides and opposites are equal.

_____ 5. Identify the shape?

e. Rhombus



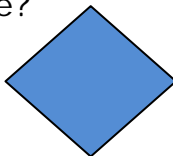
_____ 6. Fill in the blank

f. Trapezoid

A _____ has 3 sides. This figure has 3 sides.

_____ 7. Identify the shape?

g. Rhombus



_____ 8. Fill in the blank

h. Rectangle

An _____ is round.

