

Name _____

Date _____

The Attributes of Two-Dimensional Figures - Matching Worksheet

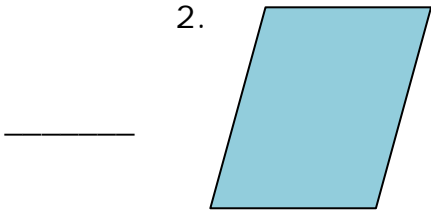
Match the shapes to their names. Write the letter of the answer that matches the shape.

1.



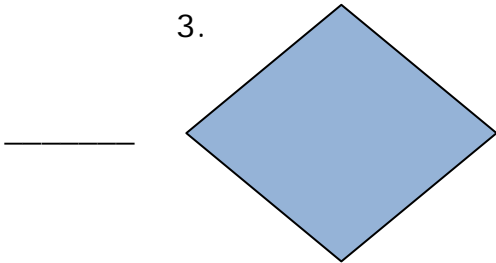
a. Rhombus

2.



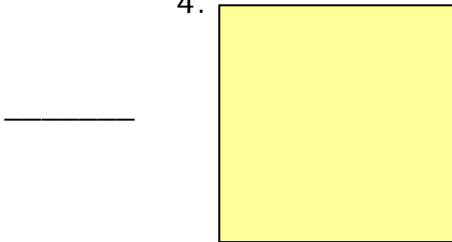
b. Rectangle

3.



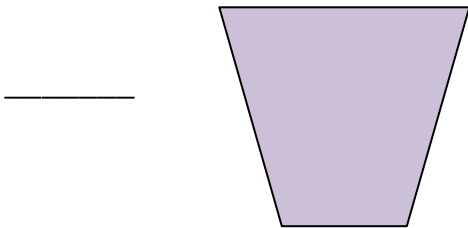
c. Trapezoid

4.



d. Parallelogram

5.



e. Square

