

Name _____

Date _____

The Attributes of Two-Dimensional Figures - Guided Lesson

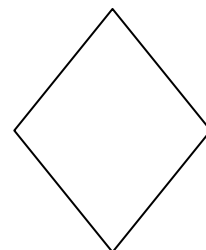

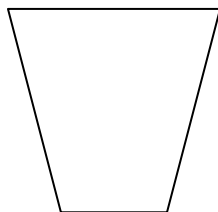

Complete the following questions:

1) Choose the correct word that describes the shape. If the lines of the shape were to continue, they would never run into each other.



- a. Square
- b. Parallelogram
- c. Rhombus

2) Color the Square yellow.



3) Name and circle the different shape.

