

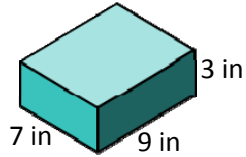
Name _____

Date _____

Cubic Volume: Multiplication Relationships - Matching Worksheet

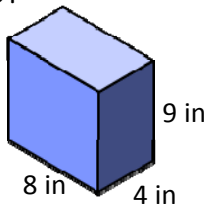
Match the word problems to their answers.

- _____ 1.
What is the volume?



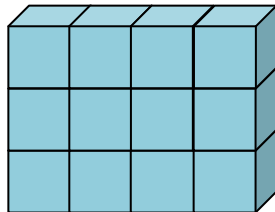
a. 12

- _____ 2.
What is the volume?



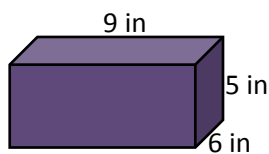
b. 360 ft^3

- _____ 3.
How many cube units in this object?



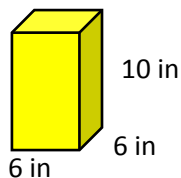
c. 189 ft^3

- _____ 4.
What is the volume?



d. 270 ft^3

- _____ 5.
What is the volume?



e. 288 ft^3

