

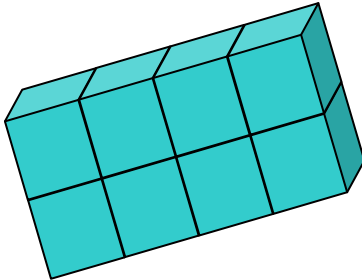
Name _____

Date _____


Measuring Volume with Unit Cubes - Guided Lesson

Complete the following problems:

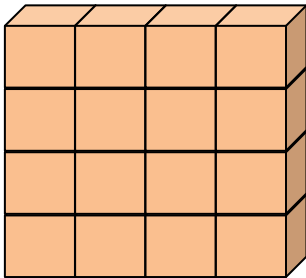
- 1) Choose the correct volume of the object when each face measures 3 cm.



- a. 27 cm^3 b. 216 cm^3 c. 24 cm^3 d. 206 cm^3

- 2) Which statement is true, if you know that each  measures are:

Length, width, height = 4 cm



- a. The volume of the object is 64 cm^3 .
b. The volume of the object is $1,024 \text{ cm}^3$.

- 3) Find the volume of the object, when all sides of each cube are 2 cm.

