

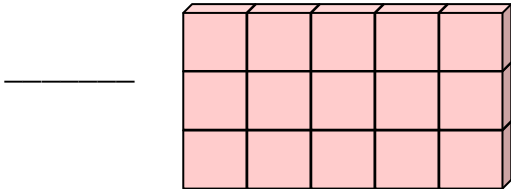
Name \_\_\_\_\_

Date \_\_\_\_\_

### The Volume of Solid Figures - Matching Worksheet

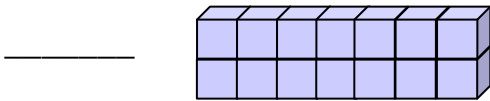
Match the objects with their correct cubic unit. Write the letter of the answer that matches the object.

1.



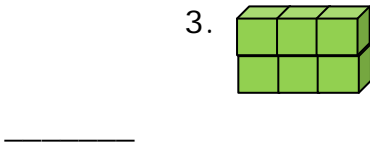
a. 6 Cubic units

2.



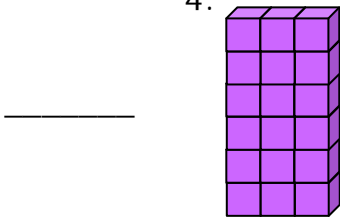
b. 16 Cubic units

3.



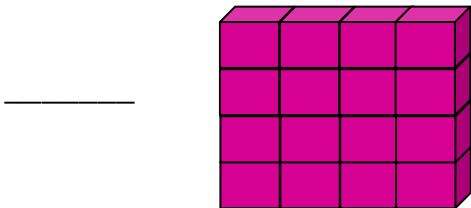
c. 15 Cubic units

4.



d. 14 Cubic units

5.



e. 18 Cubic units

