


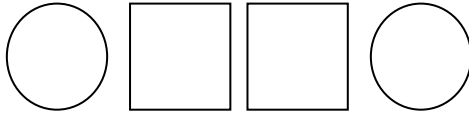
Name _____

Date _____

Math Rules and Patterns - Matching Worksheet


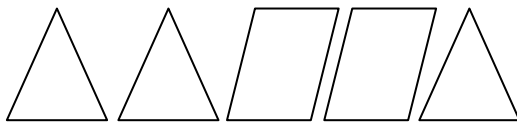
What comes next in each pattern?

1.



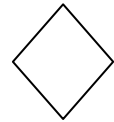
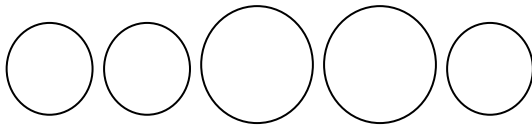
a.

2.



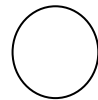
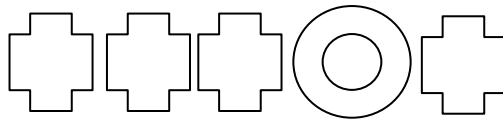
b.

3.



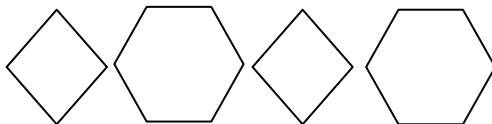
c.

4.



d.

5.



e.

