

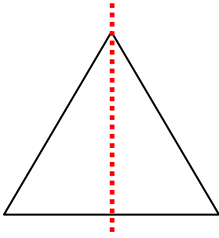
Name \_\_\_\_\_

Date \_\_\_\_\_

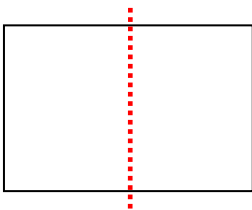
### Lines of Symmetry in Two-dimensional Figures - Matching Worksheet

Match the shapes with their half symmetries.

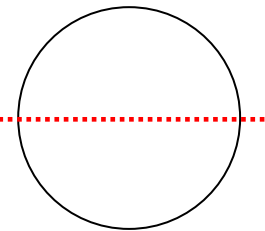
1.



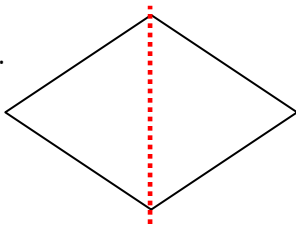
2.



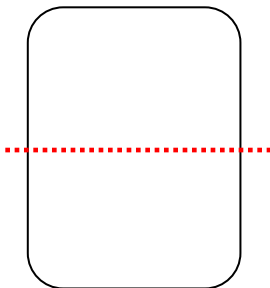
3.




4.



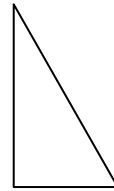
5.



a.



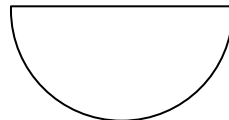
b.



c.



d.



e.

