

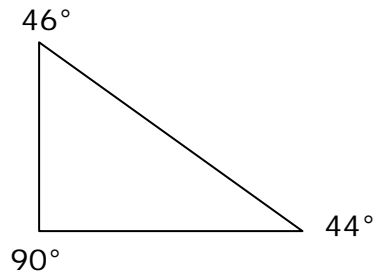
Name _____

Date _____

Classifying Two-dimensional Figures - Independent Practice Worksheet

Complete all the problems.

1. What kind of triangle is this?

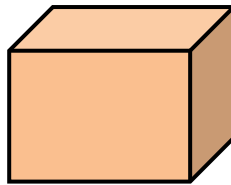


a) Acute

b) right

c) obtuse

2. What figure is this?



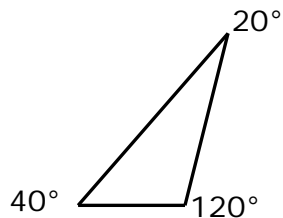
a) Pyramid

b) cube

c) triangle

d) pentagon

3. What kind of triangle is this?



a) Acute

b) right

c) obtuse



Name _____

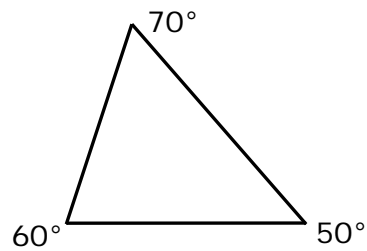
Date _____

4. What figure is this?



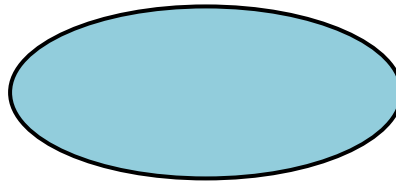
- a) Pyramid b) pentagon c) triangle d) trapezoid

5. What kind of triangle is this?



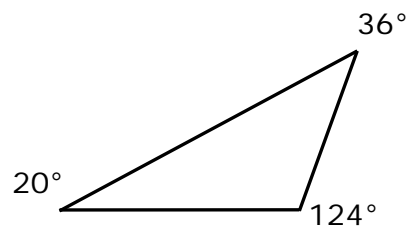
- a) Acute b) right c) obtuse

6. What figure is this?



- a) Pyramid b) rectangle c) oval d) nonagon

7. What kind of triangle is this?



- a) Acute b) right c) obtuse



Name _____

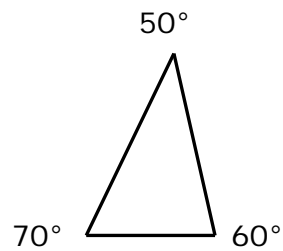
Date _____

8. What figure is this?



- a) Parallelogram b) rectangle c) octagon d) square

9. What kind of triangle is this?



- a) Acute b) right c) obtuse

10. What figure is this?



- a) Pyramid b) rectangle c) triangle d) pentagon

