

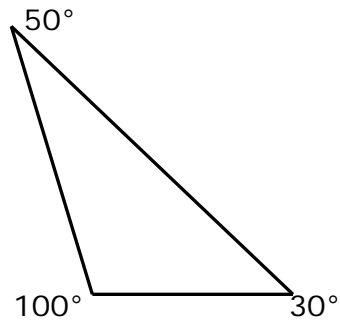
Name _____

Date _____

Classifying Two-dimensional Figures - Guided Lesson

Complete the following problems:

1) What kind of triangle is this?

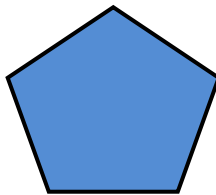


a) Acute

b) right

c) obtuse

2) What figure is this?



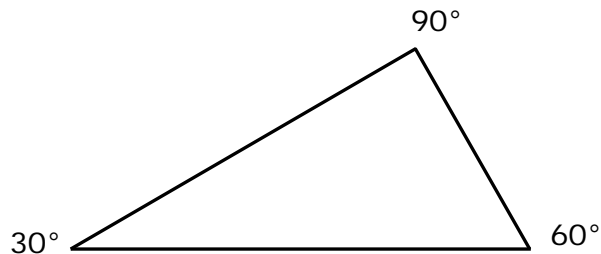
a) pyramid

b) rectangle

c) triangle

d) pentagon

3) What kind of triangle is this?



a) Acute

b) right

c) obtuse

