

Name \_\_\_\_\_

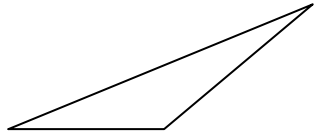
Date \_\_\_\_\_

### Triangles: Worksheet 1

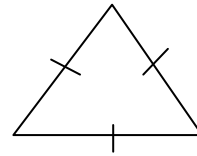
Are the triangles equilateral, isosceles, or scalene?

Are the triangles acute, obtuse, or right?

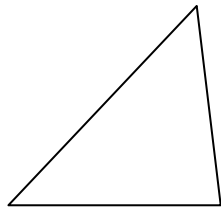
1.



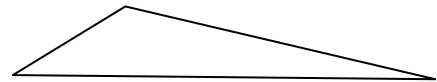
2.



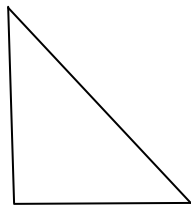
3.



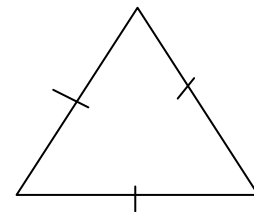
4.



5.



6.



Draw a triangle that fits the description. If the triangle is not possible, tell why.

7 An acute scalene triangle.

8 An obtuse scalene triangle.

9 A right isosceles triangle.

10 An obtuse equilateral triangle.



Name \_\_\_\_\_

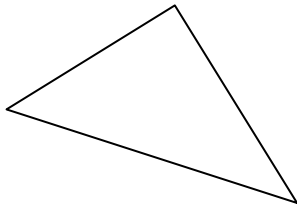
Date \_\_\_\_\_

### Triangles: Worksheet 2

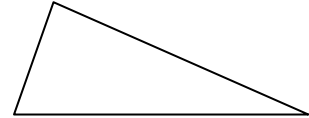
Are the triangles equilateral, isosceles, or scalene?

Are the triangles acute, obtuse, or right?

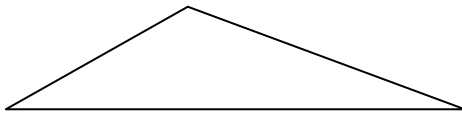
1.



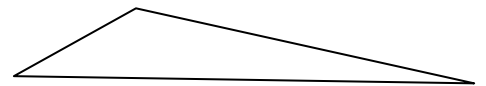
2.



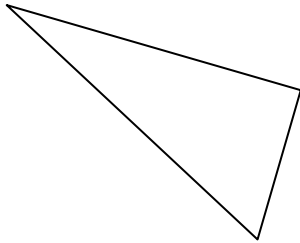
3.



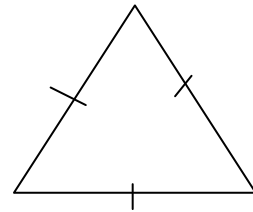
4.



5.



6.



Draw a triangle that fits the description. If the triangle is not possible, tell why.

7 An acute scalene triangle.

8 An obtuse equilateral triangle.

9 An acute isosceles triangle.

10 A right isosceles triangle.



Name \_\_\_\_\_

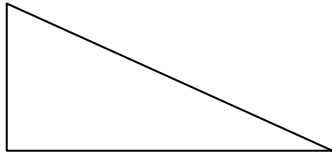
Date \_\_\_\_\_

### Triangles: Worksheet 3

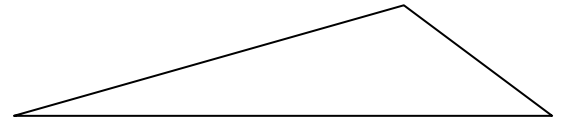
Are the triangles equilateral, isosceles, or scalene?

Are the triangles acute, obtuse, or right?

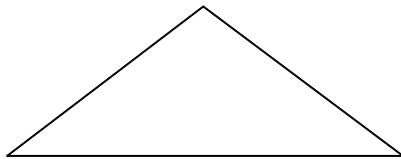
1.



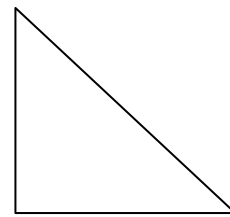
2.



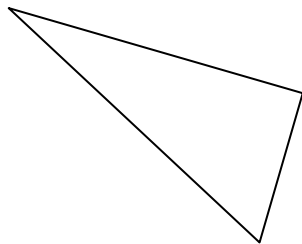
3.



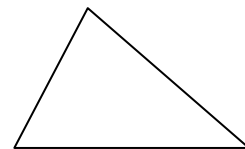
4.



5.



6.



Draw a triangle that fits the description. If the triangle is not possible, tell why.

7 An obtuse scalene triangle.

8 An acute equilateral triangle.

9 An acute scalene triangle.

10 A right scalene triangle.



Name \_\_\_\_\_

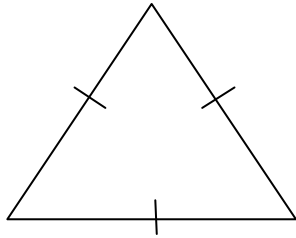
Date \_\_\_\_\_

Triangles: Worksheet 4

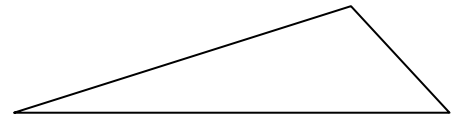
Are the triangles equilateral, isosceles, or scalene?

Are the triangles acute, obtuse, or right?

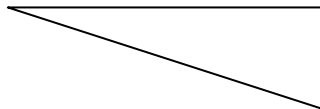
1.



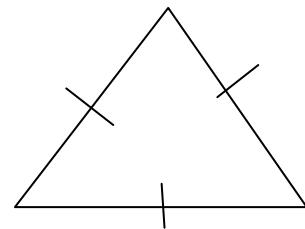
2.



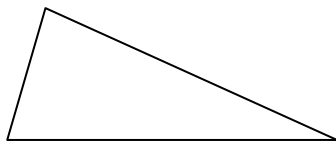
3.



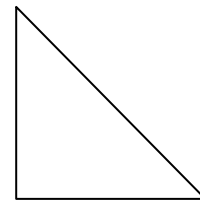
4.



5.



6.



Draw a triangle that fits the description. If the triangle is not possible, tell why.

7 A right isosceles triangle

8 An acute and scalene triangle.

9 An obtuse scalene triangle.

10 A right scalene triangle.



Name \_\_\_\_\_

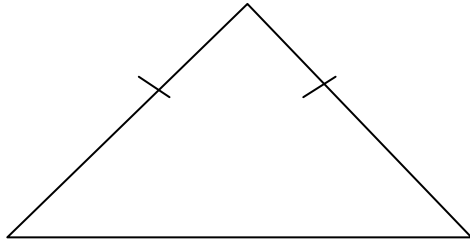
Date \_\_\_\_\_

Triangles: Worksheet 5

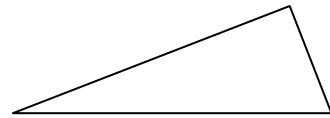
Are the triangles equilateral, isosceles, or scalene?

Are the triangles acute, obtuse, or right?


1.



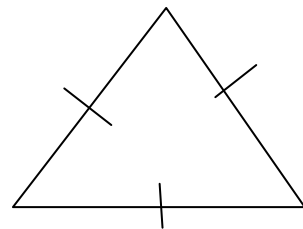
2.



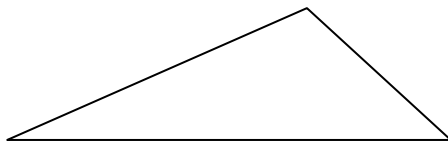
3.



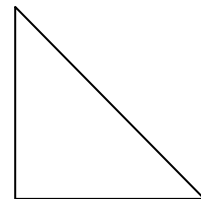
4.



5.



6.



Draw a triangle that fits the description. If the triangle is not possible, tell why.

7 A right isosceles triangle

8 An acute and scalene triangle.

9 An obtuse scalene triangle.

10 An obtuse scalene triangle.

