

Name \_\_\_\_\_

Date \_\_\_\_\_

### Identify Angles - Matching Worksheet

Match the angles and lines to their names. Write the letter of the answer.

\_\_\_ 1.



a. Straight

\_\_\_ 2.



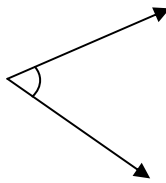
b. Parallel lines

\_\_\_ 3.



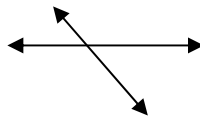
c. Acute angle

\_\_\_ 4.




d. Perpendicular lines

\_\_\_ 5.



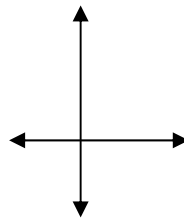
e. Right angle

\_\_\_ 6.



f. Obtuse angle

\_\_\_ 7.



g. Intersecting line

