

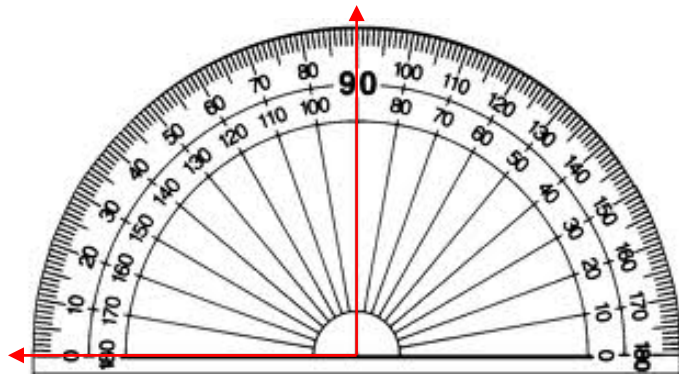
Name _____

Date _____

Measure Angles with a Protractor - Guided Lesson

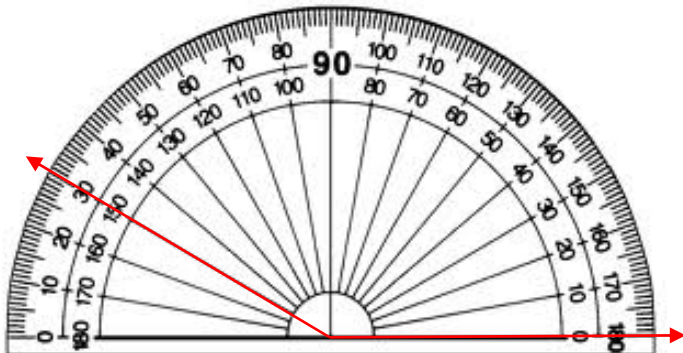
Complete the following problems:

1. Is this angle acute, right, or obtuse?



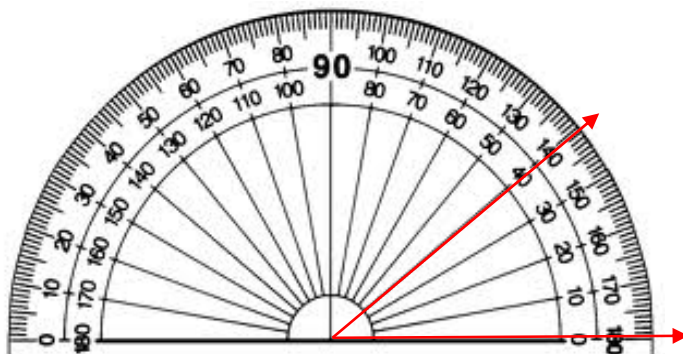
- acute
- right
- obtuse

2. Is this angle acute, right, or obtuse?



- acute
- right
- obtuse

3. Is this angle acute, right, or obtuse?



- acute
- right
- obtuse

