

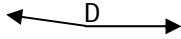
Name _____

Date _____

Topic: Classifying and Measuring Angles- Worksheet 1

Classify the angles as straight, right, acute, obtuse, or reflex.

1.



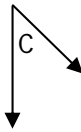
\sphericalangle D _____

2.



\sphericalangle B _____

3.



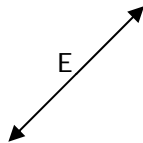
\sphericalangle C _____

4.



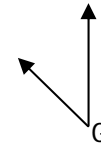
\sphericalangle A _____

5.



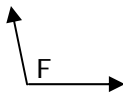
\sphericalangle E _____

6.



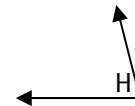
\sphericalangle G _____

7.



\sphericalangle F _____

8.



\sphericalangle H _____

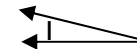
9.



\sphericalangle I _____

10.

J



\sphericalangle J _____



Name _____

Date _____

Topic: Classifying and Measuring Angles- Worksheet 2

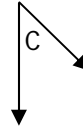
Classify the angles as straight, right, acute, obtuse, or reflex.

11.



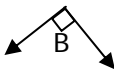
$\sphericalangle A$ _____

12.



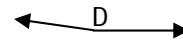
$\sphericalangle C$ _____

13.



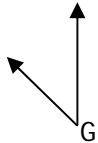
$\sphericalangle B$ _____

14.



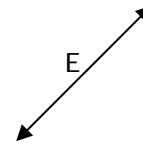
$\sphericalangle D$ _____

15.



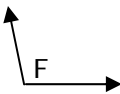
$\sphericalangle G$ _____

16.



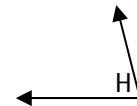
$\sphericalangle E$ _____

17.



$\sphericalangle F$ _____

18.



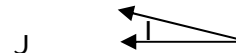
$\sphericalangle H$ _____

19.



$\sphericalangle J$ _____

20.



$\sphericalangle I$ _____



Name _____

Date _____

Topic: Classifying and Measuring Angles- Worksheet 3

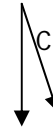
Classify the angles as straight, right, acute, obtuse, or reflex.

21.



$\sphericalangle A$ _____

22.



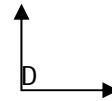
$\sphericalangle C$ _____

23.



$\sphericalangle B$ _____

24.



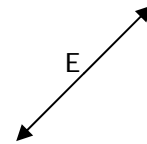
$\sphericalangle D$ _____

25.



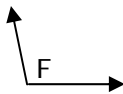
$\sphericalangle G$ _____

26.



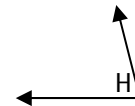
$\sphericalangle E$ _____

27.



$\sphericalangle F$ _____

28.



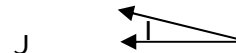
$\sphericalangle H$ _____

29.



$\sphericalangle J$ _____

30.



$\sphericalangle I$ _____



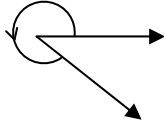
Name _____

Date _____

Topic: Classifying and Measuring Angles- Worksheet 4

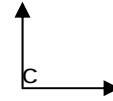
Classify the angles as straight, right, acute, obtuse, or reflex.

31.



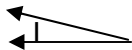
$\angle A$ _____

32.



$\angle C$ _____

33.



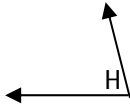
$\angle J$ _____

34.



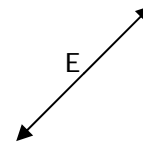
$\angle C$ _____

35.



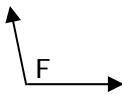
$\angle H$ _____

36.



$\angle E$ _____

37.



$\angle F$ _____

38.



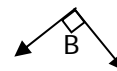
$\angle G$ _____

39.



$\angle J$ _____

40.



$\angle B$ _____



Name _____

Date _____

Topic: Classifying and Measuring Angles- Worksheet 5

Classify the angles as straight, right, acute, obtuse, or reflex.

