


Name _____

Date _____

Topic: Visual Multiplication - Worksheet 1

1. 2 rows of 4




$2 \times 4 = \underline{\quad}$

2. 3 rows of 3



$3 \times 3 = \underline{\quad}$

3. 3 rows of 4



$3 \times 4 = \underline{\quad}$

4. 2 rows of 3



$2 \times 3 = \underline{\quad}$



Name _____


Date _____

5. 2 rows of 2



$2 \times 2 = \underline{\quad}$

6. 2 rows of 5



$2 \times 5 = \underline{\quad}$




Name _____

Date _____

Topic: Visual Multiplication - Worksheet 2

1. 4 rows of 4




$4 \times 4 = \underline{\quad}$

2. 2 rows of 5




$2 \times 5 = \underline{\quad}$

3. 3 rows of 3



$3 \times 3 = \underline{\quad}$

4. 2 rows of 7




$2 \times 7 = \underline{\quad}$



Name _____


Date _____

5. 4 rows of 3



$$4 \times 3 = \underline{\quad}$$

6. 2 rows of 3



$$2 \times 3 = \underline{\quad}$$



Name _____

Date _____

Topic: Visual Multiplication - Worksheet 3

1. 4 rows of 5




$4 \times 5 = \underline{\quad}$

2. 3 rows of 5



$3 \times 5 = \underline{\quad}$

3. 3 rows of 2



$3 \times 2 = \underline{\quad}$

4. 3 rows of 7




$3 \times 7 = \underline{\quad}$



Name _____


Date _____

5. 4 rows of 2



$$4 \times 2 = \underline{\quad}$$

6. 3 rows of 3



$$3 \times 3 = \underline{\quad}$$




Name _____

Date _____


Topic: Visual Multiplication - Worksheet 4

1. 2 rows of 2




$2 \times 2 = \underline{\quad}$

2. 4 rows of 5



$4 \times 5 = \underline{\quad}$

3. 4 rows of 4



$4 \times 4 = \underline{\quad}$

4. 3 rows of 6




$3 \times 6 = \underline{\quad}$



Name _____


Date _____

5. 3 rows of 3



$$3 \times 3 = \underline{\quad}$$

6. 5 rows of 5



$$5 \times 5 = \underline{\quad}$$

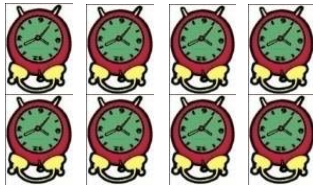


Name _____

Date _____

Topic: Visual Multiplication - Worksheet 5

1. 2 rows of 4




$$2 \times 4 = \underline{\quad}$$

2. 3 rows of 3



$$3 \times 3 = \underline{\quad}$$

3. 4 rows of 6



$$4 \times 6 = \underline{\quad}$$

4. 4 rows of 4



$$4 \times 4 = \underline{\quad}$$



Name _____


Date _____

5. 2 rows of 2



$2 \times 2 = \underline{\quad}$

6. 5 rows of 3



$5 \times 3 = \underline{\quad}$

