

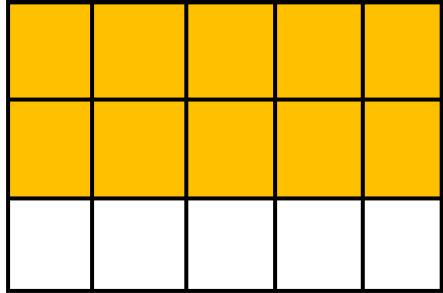
Name \_\_\_\_\_

Date \_\_\_\_\_

## Products of Fractions and Whole Number in Word Problems - Matching Worksheet

Write the letter of the answer that matches the problem.

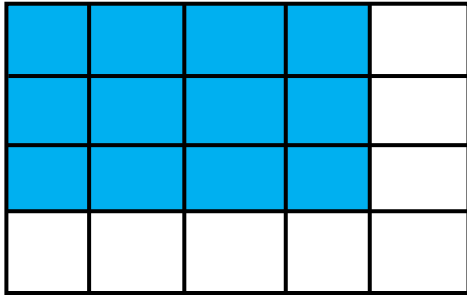
\_\_\_\_\_ 1.



X 30

a. 4.5

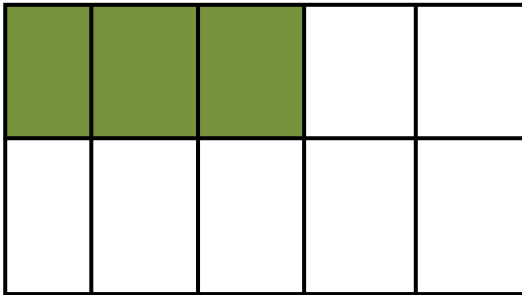
\_\_\_\_\_ 2.



X 20

b. 20


\_\_\_\_\_ 3.



X 14

c. 4

\_\_\_\_\_ 4.



X 6

d. 12

