

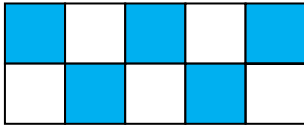
Name \_\_\_\_\_

Date \_\_\_\_\_

## Making Equivalent Fractions - Matching Worksheet


Match each model to their proper fraction.

1.



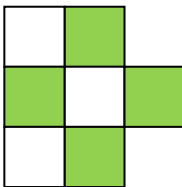
a.  $\frac{4}{6} = \frac{2}{3}$

2.



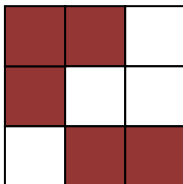
b.  $\frac{5}{9}$

3.



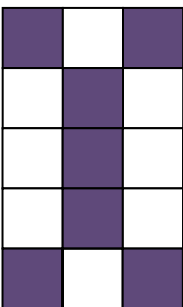
c.  $\frac{7}{15}$

4.



d.  $\frac{5}{10} = \frac{1}{2}$

5.



e.  $\frac{4}{7}$

