

Name _____

Date _____

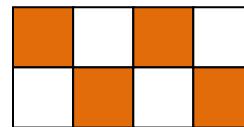
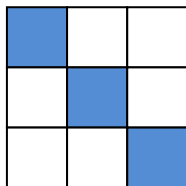

Making Equivalent Fractions - Guided Lesson

Complete the following problems:

1) Write the fraction in lowest terms.

$$\frac{12}{14} = \underline{\hspace{10em}}$$

2) Write each model as a fraction. Circle the equivalent fractions.



3) Which fraction is equivalent to $\frac{9}{15}$?

a) $\frac{2}{3}$

b) $\frac{3}{4}$

c) $\frac{3}{5}$

d) $\frac{1}{5}$

