

Name _____


Date _____

Multiplication and Division within 100 - Guided Lesson


Complete the following problems:

1) Multiply two numbers:

(i) 13×2

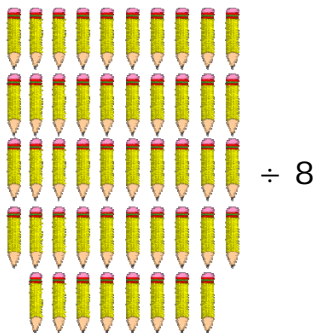


(ii) $4 \times 8 =$

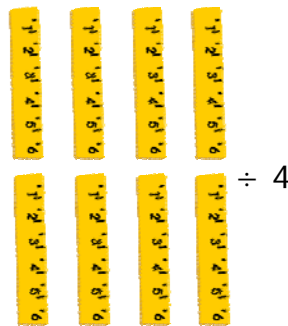


2) Divide two numbers:

(i) $48 \div 8 =$



(ii) $4 \overline{)8}$



3) Multiply two given numbers and divide result by 6.

(i) 3×6



(ii) 2×3

