


Name _____

Date _____

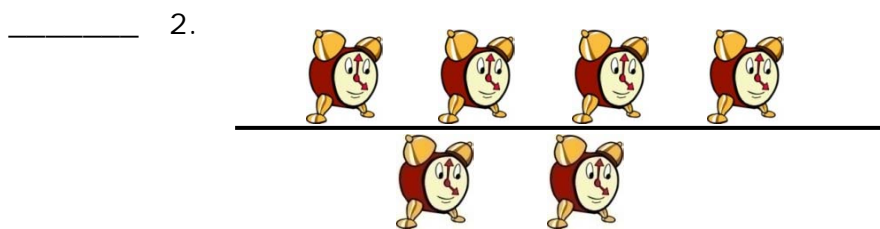
Multiplication and Division Word Problems - Matching Worksheet

Match the sentences with the images.




a. $5 \div 5 = 1$

Type the complete multiplication sentence.




b. $2 \times 4 = 8$

Type the complete division sentence.



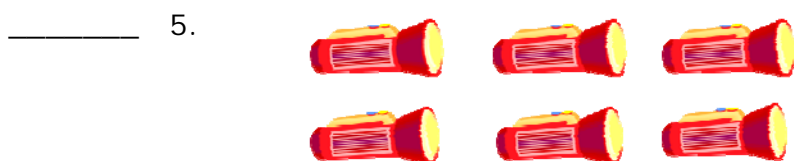
c. $3 \times 2 = 6$

Type the complete multiplication sentence.



d. $4 \div 2 = 2$

Type the complete division sentence.



e. $6 \times 3 = 18$

Type the complete multiplication sentence.

