

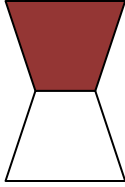
Name \_\_\_\_\_

Date \_\_\_\_\_

## Understanding Visual Fractions - Matching Worksheet


Match the colored shapes with their fractions.

1.)



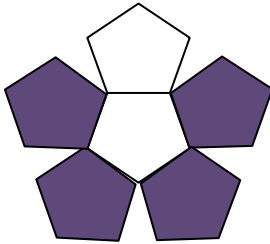
a.  $\frac{7}{8}$

2.)




b.  $\frac{1}{2}$

3.)




c.  $\frac{4}{5}$

4.)



d.  $\frac{4}{6}$

5.)



e.  $\frac{3}{6}$

