

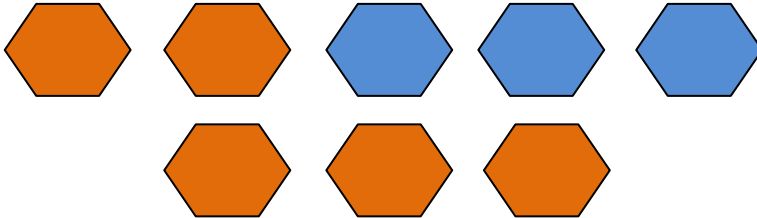
Name _____

Date _____

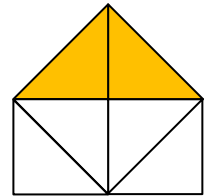

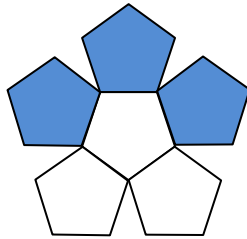
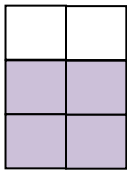
Understanding Visual Fractions - Guided Lesson

Complete the following problems:

1.) What fraction of the hexagonal prisms are blue?



2.) Which shape shows the fraction $\frac{2}{6}$?



3.) What fraction of the shapes are green?

