


Name _____

Date _____

Understanding Categories of Shapes - Matching Worksheet:

Match the shapes with their names.


1



Rhombus

a

2



Sphere

b

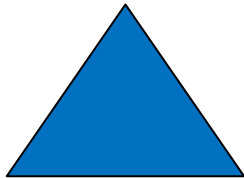
3



Square

c


4



cone

d

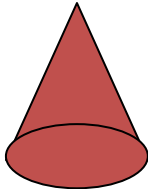
5



circle

e

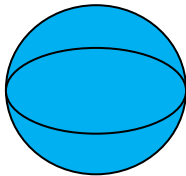
6



triangle

f

7



parallelogram

g

