


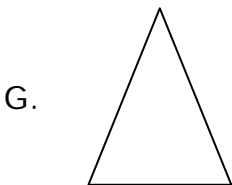

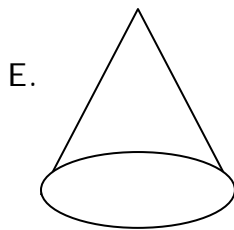
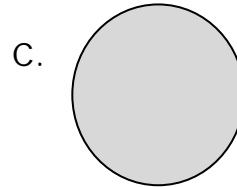
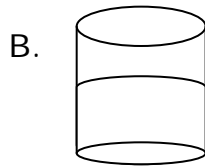
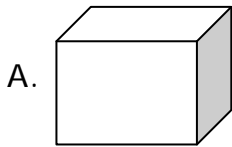
Name _____

Date _____

Understanding Categories of Shapes - Guided Lesson

Complete the following problems:

1. Name the shapes and states which are two- and three-dimensional.



2. Which of the following has 4 sides?

- a. Square
- b. Cylinder
- c. Prism
- d. Cone

3. Name and Color the shapes.

