

Name \_\_\_\_\_

Date \_\_\_\_\_

## Perimeter of Polygons In Word Problems Independent Practice

Complete all the problems.

1. A rectangle's perimeter is 54 square meters. The rectangle is 18 meters long. What is its width?


2. A rectangular piece of cheese is 9 centimeters long and 5 centimeters wide. What is its perimeter?

3. A square ice cream box has sides that are 19 feet long. What is the perimeter of the ice cream box?

4. A rectangular table is 14 centimeters long and 12 centimeters wide. What is its perimeter?

5. A rectangular match box is 6 centimeters long and 9 centimeters wide. What is its perimeter?

6. Find the width of the book. The book's perimeter is 22 cm.



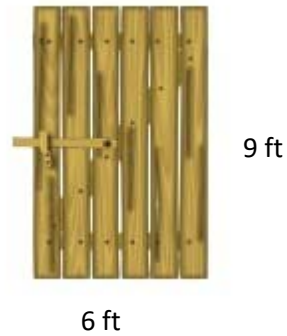
Name \_\_\_\_\_

Date \_\_\_\_\_

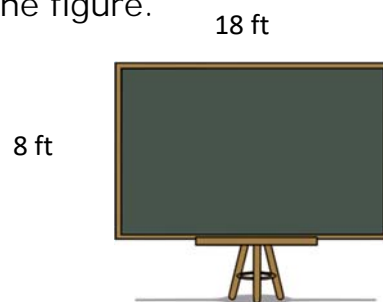
7. Find the perimeter of the LCD TV.



8. Find the perimeter of the figure.



9. Find the perimeter of the figure.



10. Find the perimeter of the cake pan.

