


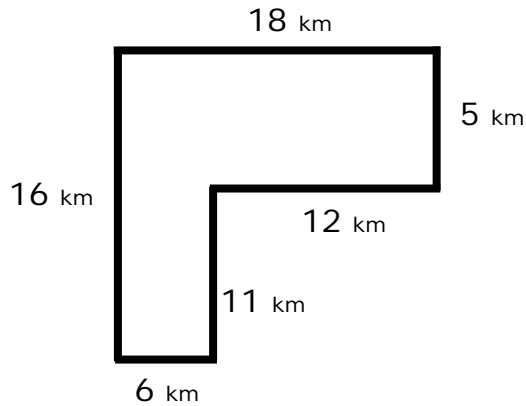
Name \_\_\_\_\_

Date \_\_\_\_\_

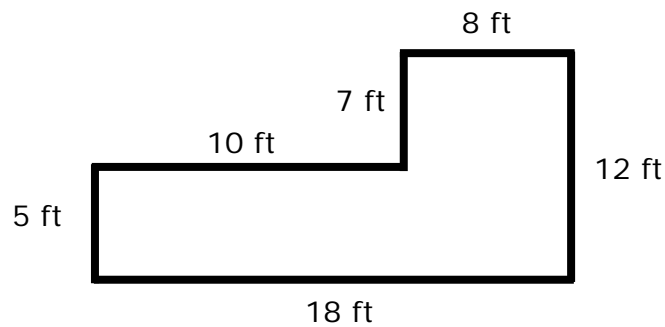
**Recognize Area as Additive - Guided Lesson**

Complete the following problems:

1) Find the area of the figure below.



2) Abe is building a uniquely shaped deck. The contractor charges \$10 per square foot. How much will it cost Alien for this deck?



3 ) Find the area of the figure

