

Name _____

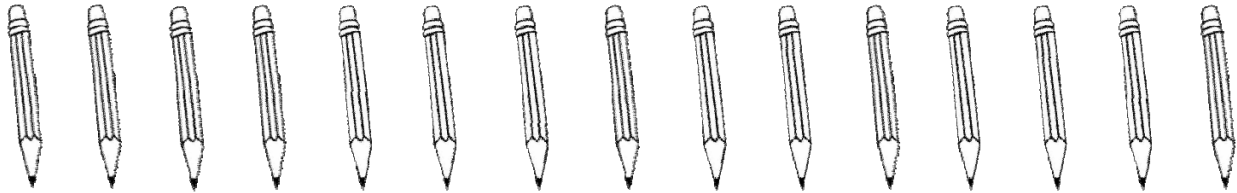
Date _____

Division Word Problems - Guided Lesson



Solve the following problems:

1) A teacher gave out 15 pencils to 3 students. Each student got the same number of pencils. How many pencils did each student get?

Number of Pencils:



2) A shop keeper was arranging a display of cups in the window. He had 18 cups to display in rows. He decided to display 3 rows with the same number of cups in each row. How many cups did he place in each row?



3) A gardener had 21 seeds to plant in pots. He decided to plant 7 seeds in each pot. How many pots of seeds did he plant?

