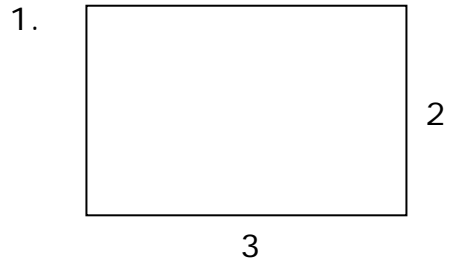


Name \_\_\_\_\_

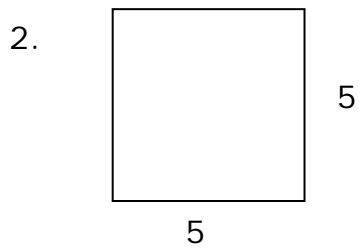
Date \_\_\_\_\_

**Simple Area of a Rectangle Independent Practice Worksheet:**

Complete all the problems. Find the area of the rectangles given below.



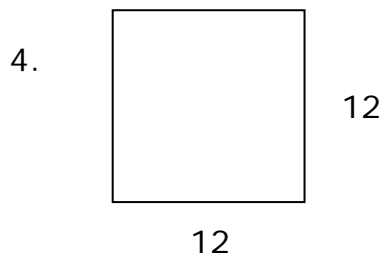
\_\_\_\_\_



\_\_\_\_\_



\_\_\_\_\_



\_\_\_\_\_



\_\_\_\_\_

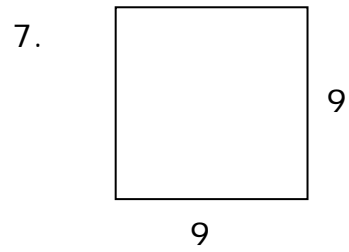


Name \_\_\_\_\_

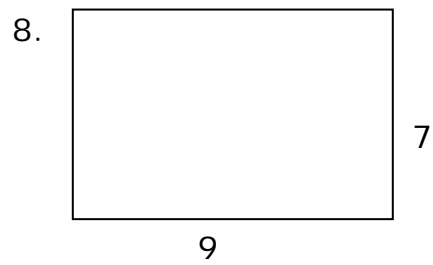
Date \_\_\_\_\_



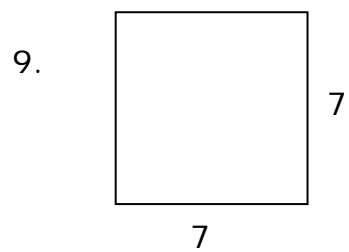
\_\_\_\_\_



\_\_\_\_\_



\_\_\_\_\_



\_\_\_\_\_



\_\_\_\_\_

