


Name _____

Date _____

Measure Area By Counting Units- Matching Worksheet


Match the following with the correct answer.

1. The area of the square is 16 cm^2



a. 3cm

2. If each square below is equivalent to:

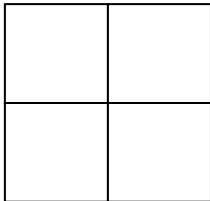


3 cm

3 cm


b. 75 cm^2

3. The area of the square is 36 cm^2



c. 2 cm

4. If each square below is equivalent to:




8 cm

8 cm

d. 54 cm^2

5. If each square below is equivalent to:



5 cm

5 cm

e. 64 cm^2

