

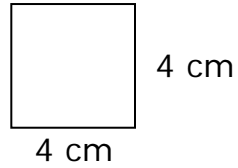
Name _____

Date _____

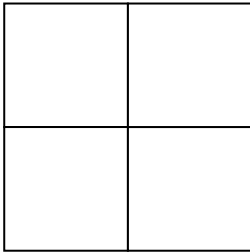
Measure Area By Counting Units- Guided Lesson

Complete the following questions.

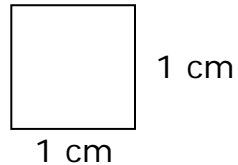
1. If each square below is equivalent to:



What is the area of the square below?



2. If each square below is equivalent to:



Draw the shape of a figure composed of these squares that has an area of 9 cm^2 .

3. The area of the square is 24 cm^2

Look at the figure below and find out the adjacent sides of each square.

