

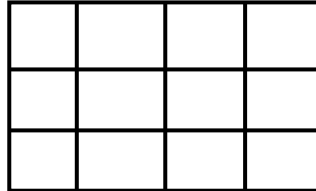
Name _____

Date _____

Area of The Rectangle Word Problems - Matching Worksheet

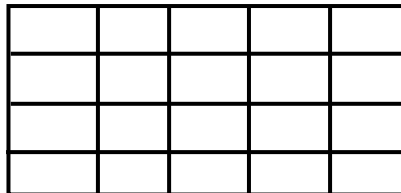
Find the area of the rectangles below. Write the letter of the answer that matches the problem.

_____ 1.



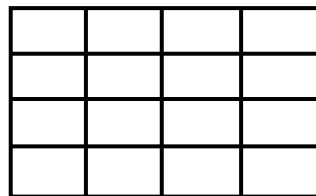
a. 16

_____ 2.



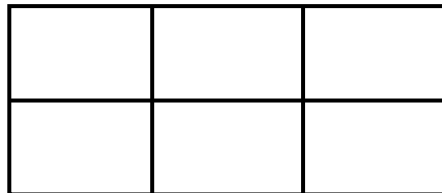
b. 12

_____ 3.



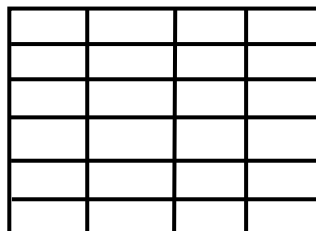
c. 20

_____ 4.



d. 24

_____ 5.



e. 6

