








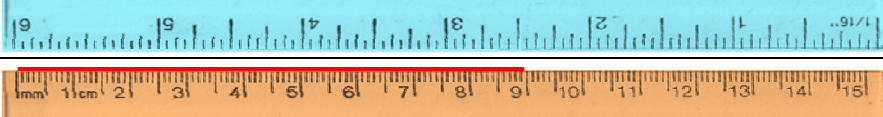


Name _____

Date _____

Colored Rulers Measurements

Read the ruler to measure the line length.

1		___ cm = ___ cm ___ mm
2		___ cm = ___ cm ___ mm
3		___ cm = ___ cm ___ mm
4		___ cm = ___ cm ___ mm
5		___ cm = ___ cm ___ mm
6		___ cm = ___ cm ___ mm
7		___ cm = ___ cm ___ mm
8		___ cm = ___ cm ___ mm
9		___ cm = ___ cm ___ mm
10		___ cm = ___ cm ___ mm



Name _____

Date _____

Answer Key

1

$4 \text{ cm} = 4 \text{ cm } 0 \text{ mm}$

2

$9 \text{ cm} = 9 \text{ cm } 0 \text{ mm}$

3

$13 \text{ cm} = 13 \text{ cm } 0 \text{ mm}$

4

$10 \text{ cm} = 10 \text{ cm } 0 \text{ mm}$

5

$3 \text{ cm} = 3 \text{ cm } 0 \text{ mm}$

6

$7 \text{ cm} = 7 \text{ cm } 0 \text{ mm}$

7

$11 \text{ cm} = 11 \text{ cm } 0 \text{ mm}$

8

$2 \text{ cm} = 2 \text{ cm } 0 \text{ mm}$

9

$15 \text{ cm} = 15 \text{ cm } 0 \text{ mm}$

10

$9 \text{ cm} = 9 \text{ cm } 0 \text{ mm}$

