

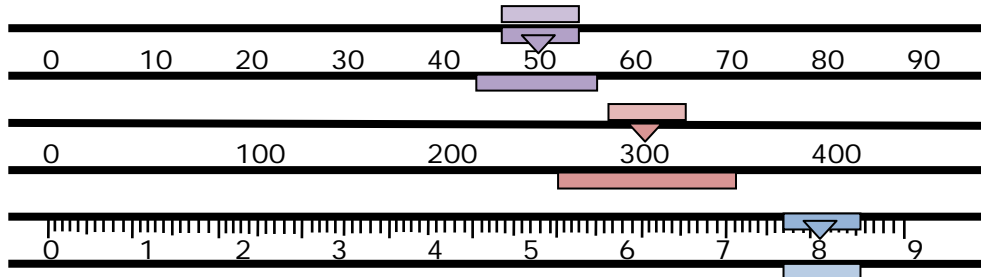
Name _____

Date _____

Liquid Volume and Mass Word Problems - Matching Worksheet

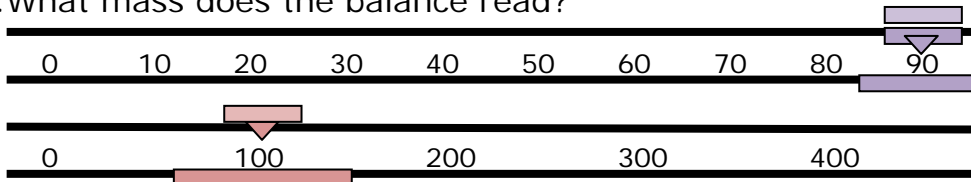
Match the word problems to their answers. Write the letter of the answer that matches the problem.

1. What mass does the balance read?



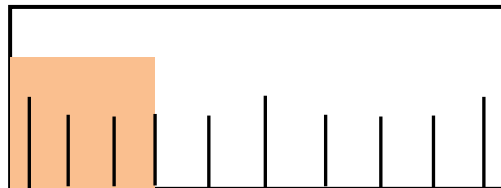
a. 4 mL

2. What mass does the balance read?



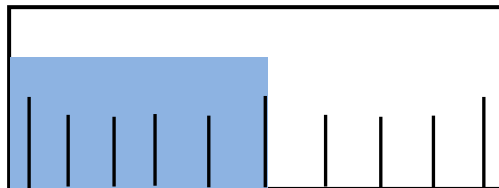
b. 7 mL

3. What is the volume of the liquid in this 10 mL container?



c. 190

4. What is the volume of the liquid in this 10 mL container?



d. 358

4. What is the volume of the liquid in this 10 mL container?



e. 5 mL

