

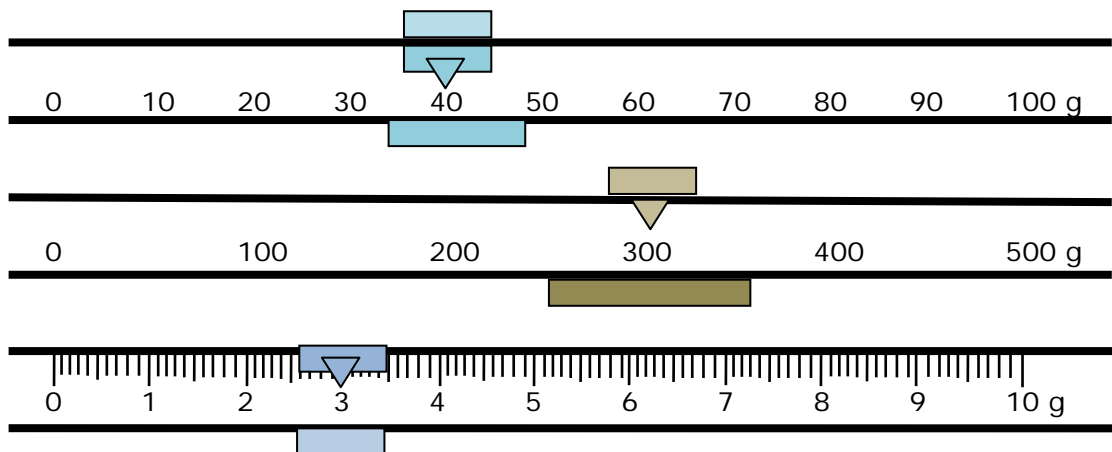
Name _____

Date _____

Liquid Volume and Mass Word Problems - Independent Practice

Complete all the problems.

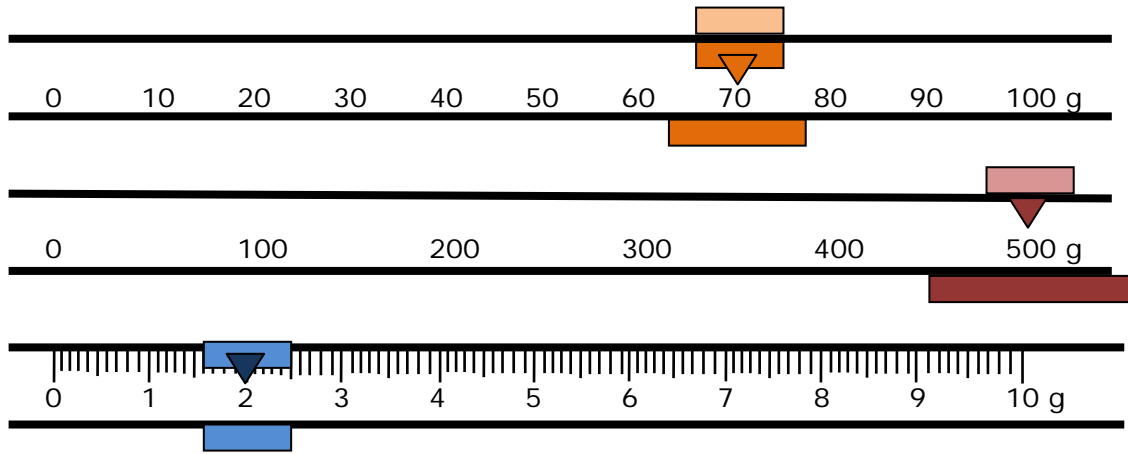
1. Denai has 6 kilograms of honey, Paul has 3 kilograms of honey, and Leon has 4 kilograms of honey. How many kilograms of honey do they have in all?
2. Emily, Olivia, and Ashley each have three liters of coffee. How many liters of coffee do they have in all?
3. Mike buys 9 kilograms of sugar. If he gives Robin 4 kilograms of sugar, how many kilograms of sugar does Mike have left?
4. Alan has 15 liters of soda, and John has 24 liters of soda. How many liters of soda do they have in all?
5. What mass does the balance read?



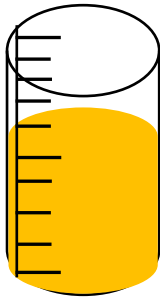
Name _____

Date _____

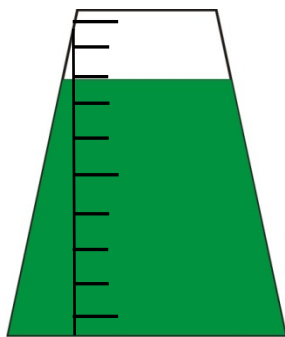
6. What mass does the balance read?



7. What is the volume of the liquid in this 10 mL container?




8. What is the volume of the liquid in this 100 mL container?



Name _____

Date _____

9. What is the volume of the liquid in this 10 mL container?



10. What is the volume of the liquid in this 100 mL container?

