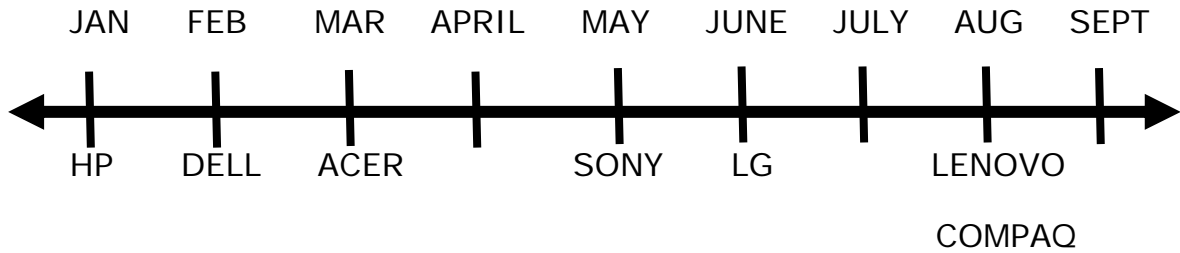


Name _____

Date _____

Measuring Time in Minutes - Independent Practice Worksheet

The following graph shows the laptop sales of an electronic shop.



1. In which month did the shop have a sale on Sony laptops? _____

2. In which months did the shop not have any sales? _____

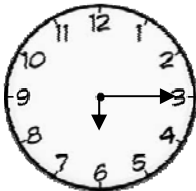
3. In which month were two brands of laptop on sale? _____

4. It is 8 o' clock on Paul's watch and he has a meeting with his client at 10:30. How much time is left before the meeting?

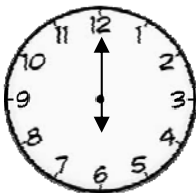
5. Jacob has an appointment with his doctor at 5 o' clock.

He reached the doctor's clinic at 4:30. How much time does he have left before the appointment? _____

6. What time is shown in the clock?



7. What time is shown in the clock?

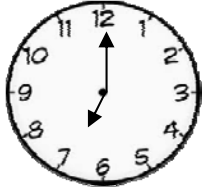




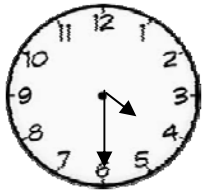
Name _____

Date _____

8. What time is shown in the clock?



9. What time is shown in the clock?



10. What time is shown in the clock?

