


Name \_\_\_\_\_

Date \_\_\_\_\_

## Comparing Fractions With Like Numerators or Denominators- Matching Worksheet


Match the figures to their fraction.

1.



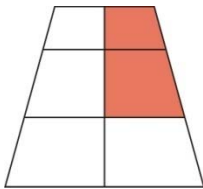
a  $\frac{4}{8}$

2.




b  $\frac{4}{6}$

3.



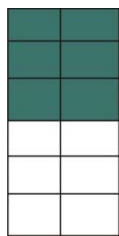
c  $\frac{6}{12}$

4.



d  $\frac{8}{12}$

5.



e  $\frac{2}{6}$

