

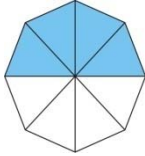
Name _____

Date _____

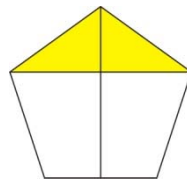
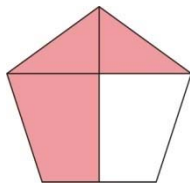
Comparing Fractions With Like Numerators or Denominators- Independent Practice Worksheet

Compare the fractions by using the $>$, $<$, or $=$ symbols.

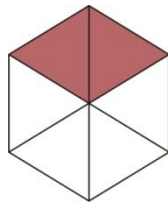
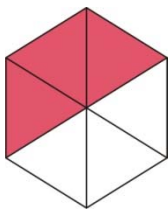
1.



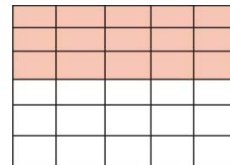

2.



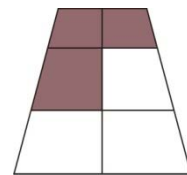
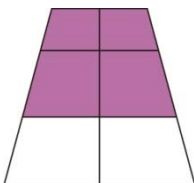
3.



4.




5.



Name _____

Date _____



6.



7.



8.



9. $\frac{4}{5}$ _____ $\frac{8}{5}$

10. $\frac{8}{9}$ _____ $\frac{3}{9}$

