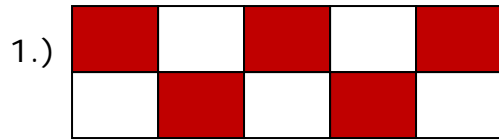


Name \_\_\_\_\_

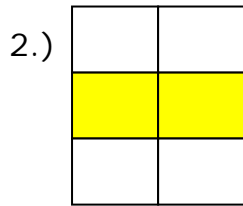
Date \_\_\_\_\_

## Equivalence and Comparing Fractions - Matching Worksheet


Match the models with the fractions that they represent.



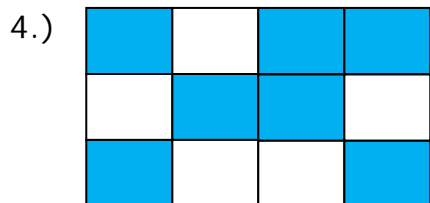
a.  $7/12$



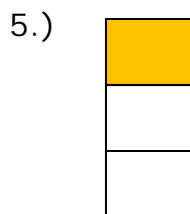
b.  $5/10$



c.  $1/3$



d.  $3/8$



e.  $2/6$

