

Name _____

Date _____

Comparing Fractions and Equivalence - Independent Worksheet

Complete all the problems. Make sure to draw pictures to help you solve the problems.

1) Write the colored fraction given below:



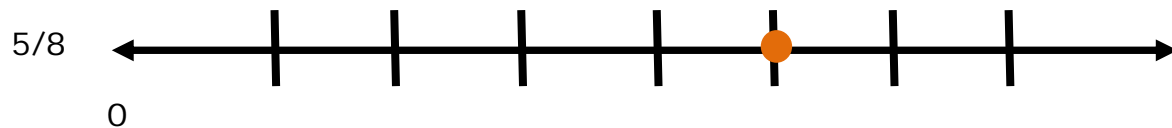
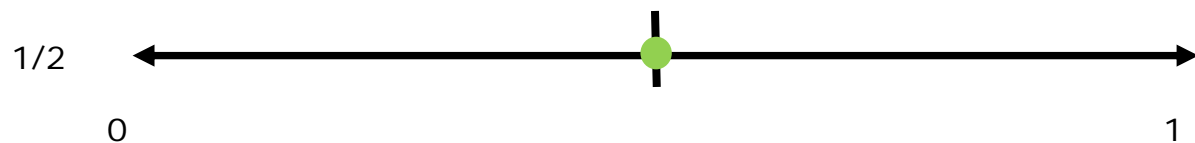


2) Write the colored fraction given below:





3) Which fraction is less?



1/2

5/8


neither; they are equal



Name _____

Date _____

4) Which fraction is greater?



3/5

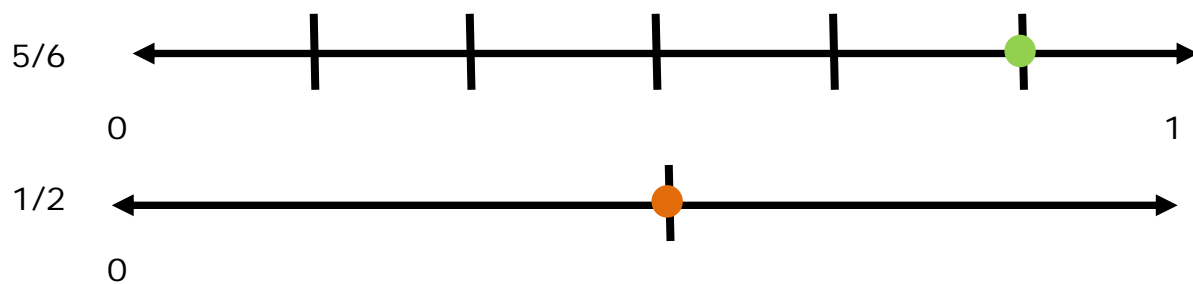


3/5

3/12

neither; they are equal

5) Which fraction is less?



1/2

5/6

neither; they are equal

6) Which fraction is less?

1/3



1/6



1/6

1/3

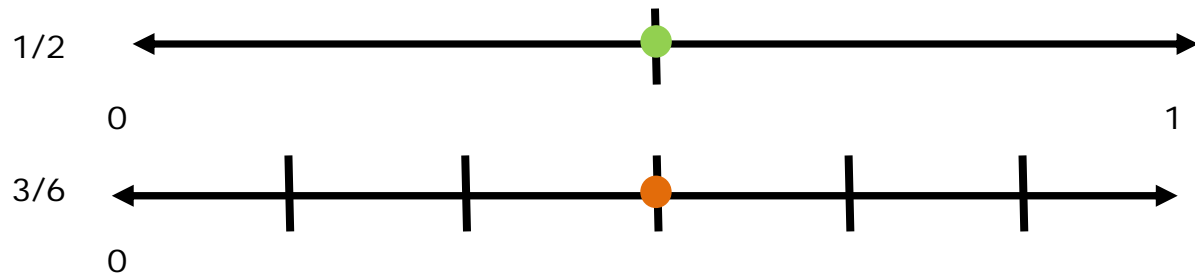
neither; they are equal



Name _____

Date _____

7) Which fraction is greater?





1/2

3/6

neither; they are equal

8) Which fraction is greater?

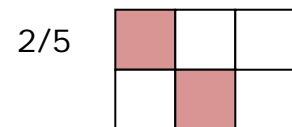


2/5

4/5

neither; they are equal

9) Which fraction is greater?




2/5

2/3

neither; they are equal

10) Which fraction is greater?



4/9

7/9

neither; they are equal

