

Name \_\_\_\_\_

Date \_\_\_\_\_

**Comparing Fractions and Equivalence Guided Lesson**

Complete the following problems:

1.) Fill in the numbers that should be in the underlined> areas.

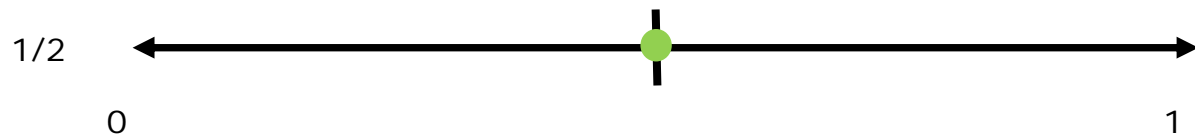


0      1/8      2/8      3/8      4/8      5/8      6/8      7/8      1

0                      1/4                                                                              1

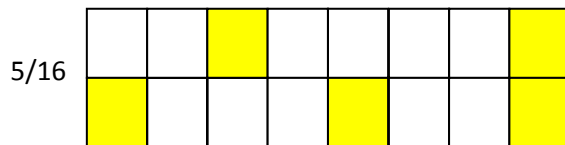

0                      4/16                                                                              1

2.) Which fraction is greater?



4/8                       1/2                       neither; they are equal

3.) Which fraction is less?



5/16                       5/10                       neither; they are equal

