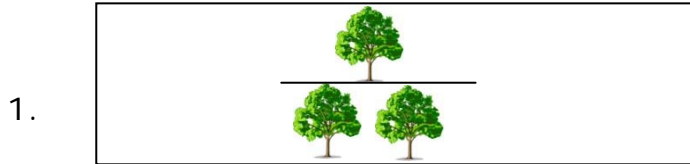



Represent Mixed Numbers on a Number Line - Matching Worksheet

Match the fractions to the visual fractions.



$\frac{4}{5}$ a



$\frac{3}{4}$ b



$\frac{1}{6}$ c



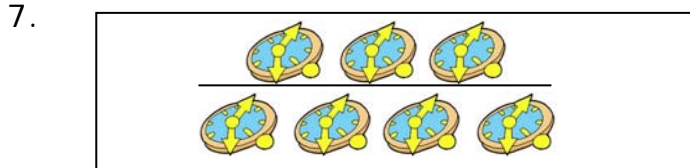
$\frac{2}{3}$ d



$\frac{1}{2}$ e



$\frac{3}{8}$ f



$\frac{2}{5}$ g



$\frac{1}{4}$ h

