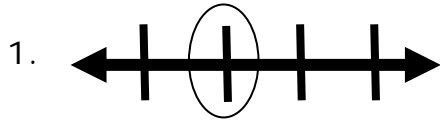


Name \_\_\_\_\_

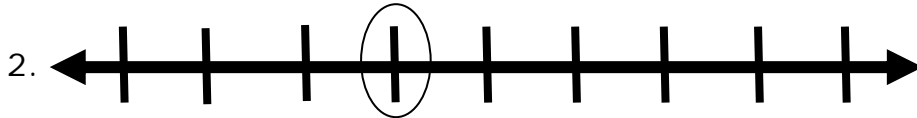
Date \_\_\_\_\_

### Understand a Fraction on a Number Line - Matching Worksheet

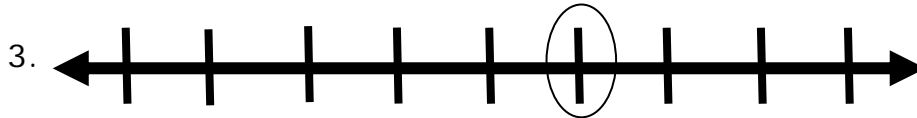
Match the circle on the number line with the correct fractions.



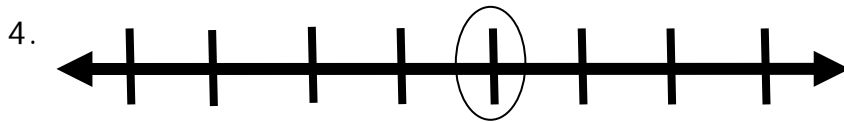
$\frac{5}{8}$  a



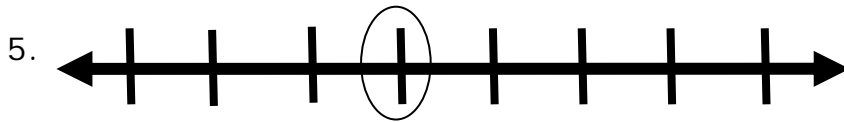
$\frac{3}{7}$  b



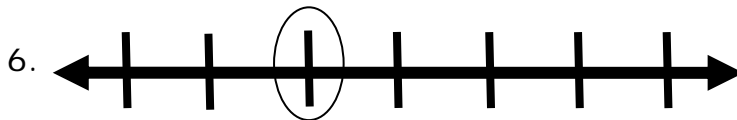
$\frac{2}{4}$  c



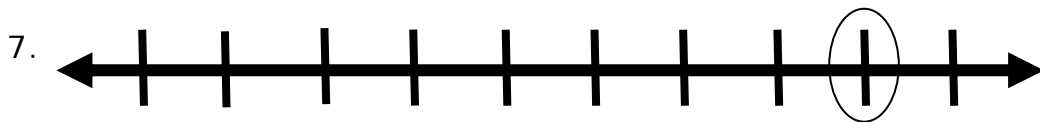
$\frac{8}{9}$  d



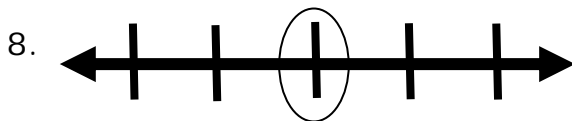
$\frac{2}{6}$  e



$\frac{1}{3}$  f



$\frac{4}{7}$  g



$\frac{3}{8}$  h

