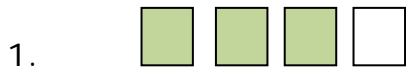


Name \_\_\_\_\_

Date \_\_\_\_\_

## Understanding Visual Fractions Matching Worksheet


Match the shapes with the correct fractions.



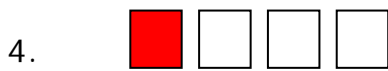
a  $\frac{4}{6}$




b  $\frac{3}{9}$



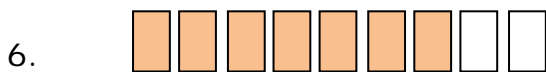
c  $\frac{2}{5}$



d  $\frac{7}{9}$



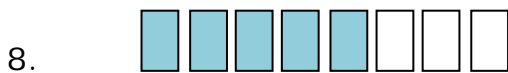
e  $\frac{3}{4}$



f  $\frac{5}{8}$



g  $\frac{6}{7}$



h  $\frac{1}{4}$

