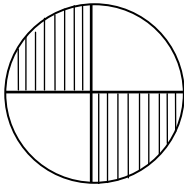


Understanding Visual Fractions - Step-by-Step Lesson

Lesson 1: Write a fraction to represent the shaded shapes.


1.



2.



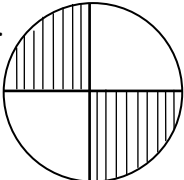
3.





Explanation:

Step 1) First we to write the shaded portion in fraction form.

Step 2) Fractions can be defined as: -A fraction divides in two parts. A number written on bottom part is the denominator. This tells us how many parts the whole is divided into. The number written on top part is the numerator which tells us how many parts the shaded area is made of.

Step 3) 1.  = $\frac{2}{4}$
→ Numerator
→ Denominator

2.  = $\frac{5}{8}$
→ Numerator
→ Denominator

3.  = $\frac{1}{2}$
→ Numerator
→ Denominator

