

Name _____

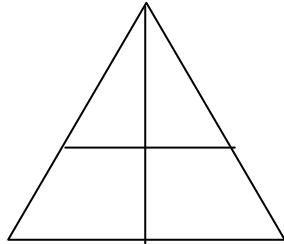
Date _____

Understanding Visual Fractions - Independent Practice Worksheet

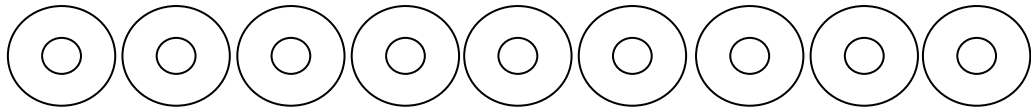
Complete all the following.

1. Color the shapes according to the fractions.

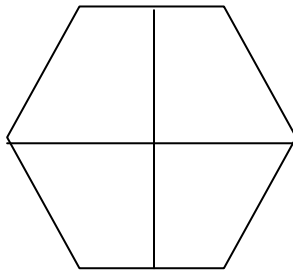
A. $\frac{2}{4}$



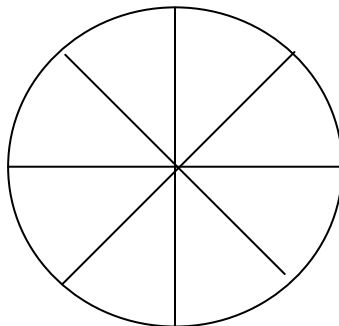
B. $\frac{6}{9}$



C. $\frac{1}{4}$



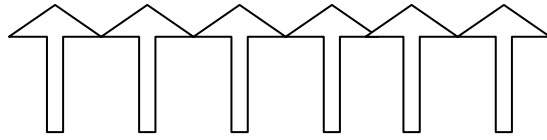
D. $\frac{5}{8}$



Name _____

Date _____

E. $\frac{3}{6}$



2. Celina has 3 pencils. 2 pencils were broken by her nephew.

What fraction of the pencils were broken by her nephew?

3. Linda went shopping with her 6 friends. 1 of her friends went to florist shop. What fraction of friend went to florist shop?

4. Draw and color shapes according to the fraction.

a. $\frac{6}{8}$

b. $\frac{9}{9}$

